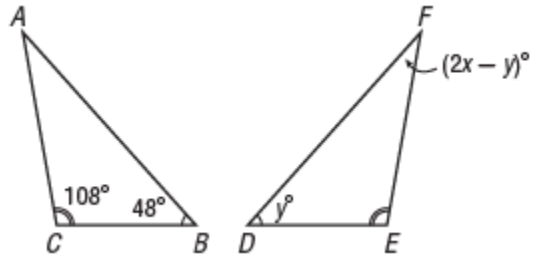


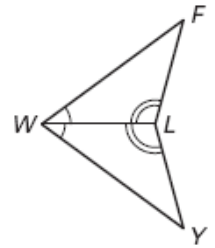
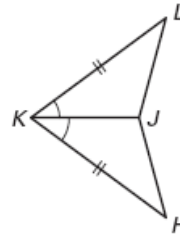
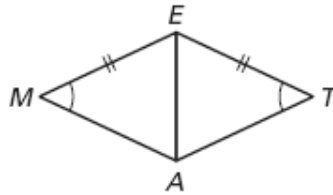
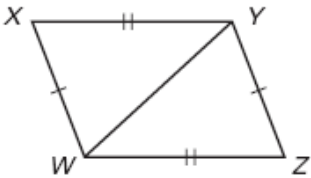
$\triangle ABC \cong \triangle FDE$. Complete each statement.

1. $\overline{AB} \cong$ _____
2. $\overline{DE} \cong$ _____
3. $\angle B \cong$ _____
4. $\angle C \cong$ _____
5. $\angle F \cong$ _____
6. $\overline{AC} \cong$ _____
7. $\triangle FED \cong$ _____
8. $\triangle BCA \cong$ _____
9. $x =$ _____
10. $y =$ _____

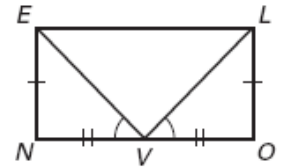
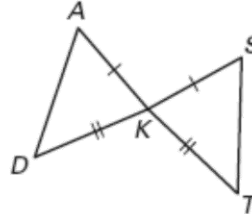
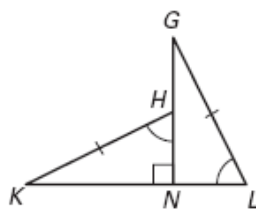
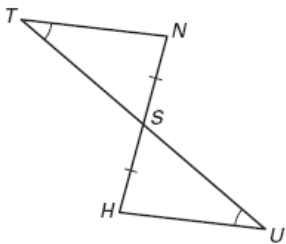


Name which triangles are congruent, if any. Justify your answer for congruent triangles.

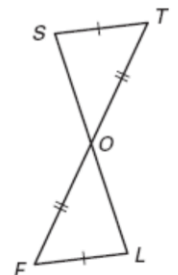
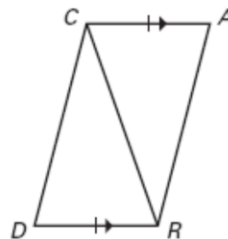
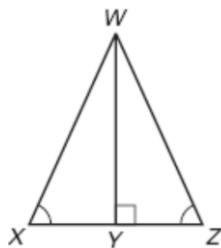
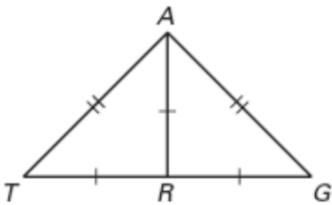
11. $\triangle XYW \cong$ _____ by _____
12. $\triangle MAE \cong$ _____ by _____
13. $\triangle KHJ \cong$ _____ by _____
14. $\triangle FLW \cong$ _____ by _____



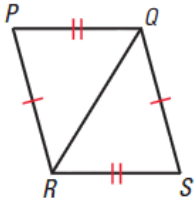
15. $\triangle TNS \cong$ _____ by _____
16. $\triangle HNK \cong$ _____ by _____
17. $\triangle DKA \cong$ _____ by _____
18. $\triangle ENV \cong$ _____ by _____



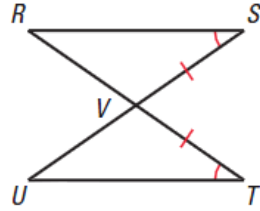
19. $\triangle TRA \cong$ _____ by _____
20. $\triangle WXY \cong$ _____ by _____
21. $\triangle CDR \cong$ _____ by _____
22. $\triangle STO \cong$ _____ by _____



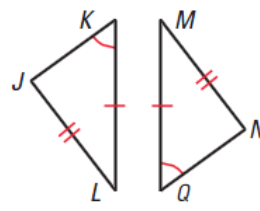
23. $\triangle PQR \cong$ _____ by _____



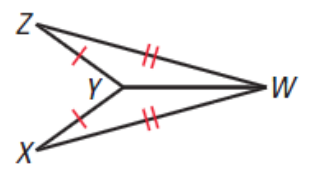
24. $\triangle RVS \cong$ _____ by _____



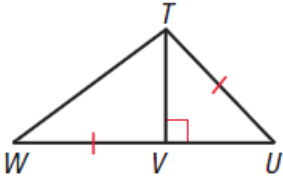
25. $\triangle KJL \cong$ _____ by _____



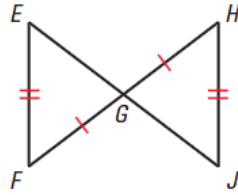
26. $\triangle ZYW \cong$ _____ by _____



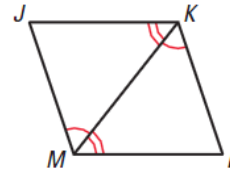
27. $\triangle TVW \cong$ _____ by _____



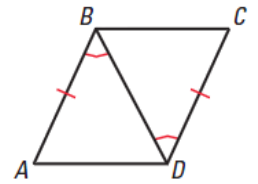
28. $\triangle EFG \cong$ _____ by _____



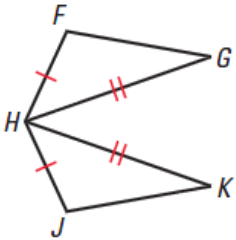
29. $\triangle JKM \cong$ _____ by _____



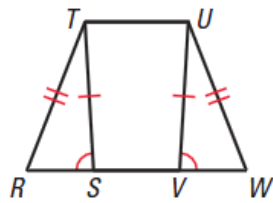
30. $\triangle ABD \cong$ _____ by _____



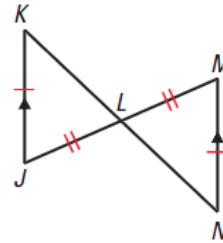
31. $\triangle FHG \cong$ _____ by _____



32. $\triangle RST \cong$ _____ by _____



33. $\triangle KJL \cong$ _____ by _____



34. $\triangle ABC \cong$ _____ by _____

