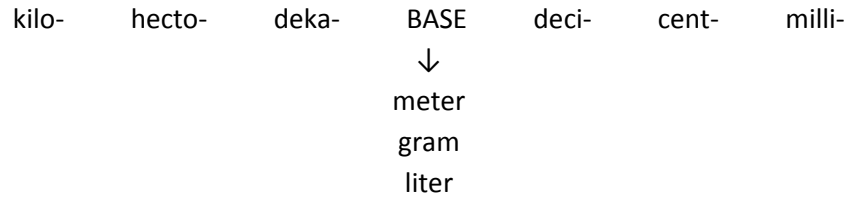


Memorize this chart:



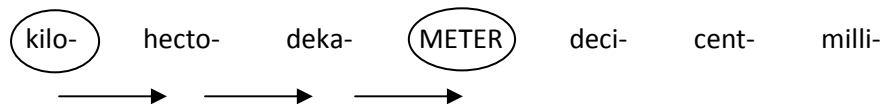
Remember order with:

King Henry Died By Drinking Chocolate Milk

Conversion Steps:

1. Copy problem
 2. Look at chart. Start with what you know and move towards what you need to change it to.
 3. Move the decimal the same direction and the same amount of moves.
- *Remember: If the # doesn't have a decimal, place one at the back (behind the whole #)

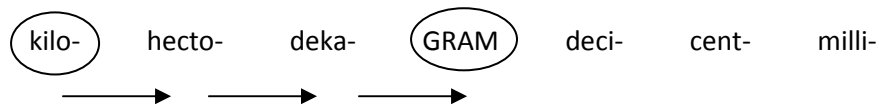
Ex. 67.5 km = _____ m



Decimal will move 3 places to the right (fill the empty places with zeroes).

675 __ __ = 67500 m or 67,500 m

Ex. 6 kg = _____ g



Decimal will move 3 places to the right (fill the empty places with zeroes).

6 __ __ __ = 6000 g

Ex. 400 mL = _____ L



Decimal will move 3 places to the left (put a zero in front of the decimal point).

0.400 mL = 0.4 mL

