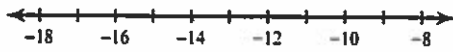


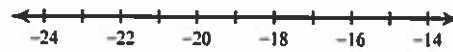
## Solving &amp; Graphing Inequalities

Solve each inequality and graph its solution.

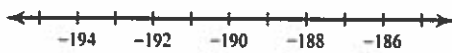
1)  $-22 \geq r - 8$



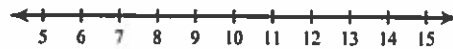
2)  $18 + n \geq 1$



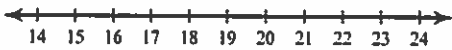
3)  $-10 < \frac{k}{19}$



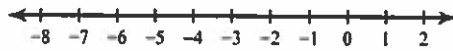
4)  $-7 < x - 14$



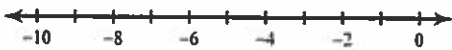
5)  $\frac{x}{9} \geq 2$



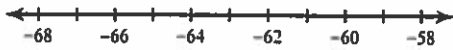
6)  $-16 \leq p - 13$



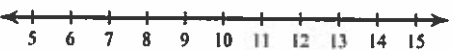
7)  $-16 > n - 8$



8)  $\frac{a}{7} > -9$



9)  $-2 < n - 13$



10)  $-12 \geq b - 4$

