

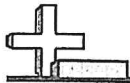


6th Grade Math

NTI Day 6

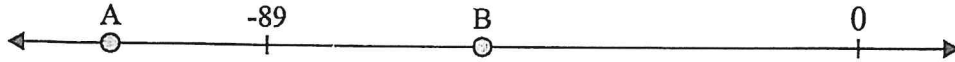
Mr. Bryan Berta

bryan.bertha@wburg.kyschools.us




Solve each problem.


1) Which letter best shows -112?




2) Which letter best shows -43?




3) Which letter best shows -84?




4) Which letter best shows -105?



5) Which letter best shows -102?



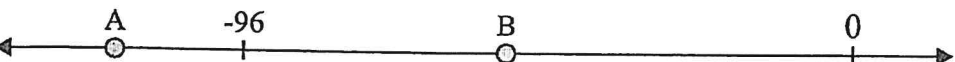
6) Which letter best shows -25?



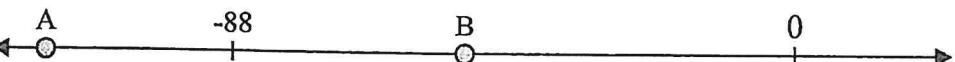
7) Which letter best shows -10?



8) Which letter best shows -116?



9) Which letter best shows -52?

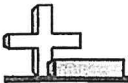


10) Which letter best shows -123?



Answers

1. _____
2. _____
3. _____
4. _____
5. _____
6. _____
7. _____
8. _____
9. _____
10. _____



Use >, < or = to compare.

1) -59 ___ -60

2) -47 ___ -46

3) -24 ___ -69

4) -34 ___ 38

5) -73 ___ 76

6) -85 ___ -86

7) -28 ___ -27

8) -98 ___ -97

9) -30 ___ 32

10) -35 ___ 42

11) -63 ___ -64

12) -42 ___ -41

13) -83 ___ -80

14) -45 ___ -46

15) -31 ___ -82

16) -74 ___ -58

17) -82 ___ -35

18) -81 ___ -39

19) -60 ___ -61

20) -81 ___ 91

Answers

1. _____

2. _____

3. _____

4. _____

5. _____

6. _____

7. _____

8. _____

9. _____

10. _____

11. _____

12. _____

13. _____

14. _____

15. _____

16. _____

17. _____

18. _____

19. _____

20. _____

1-10	95	90	85	80	75	70	65	60	55	50
11-20	45	40	35	30	25	20	15	10	5	0