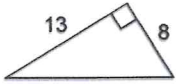


NTI Day 8

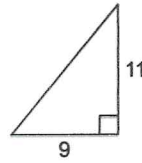
Find each missing length to the nearest tenth.

1)



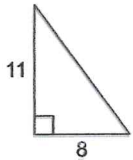
- A) 14.7 B) 15.3
C) 234.1 D) 21

2)



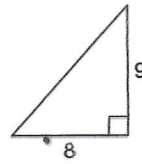
- A) 20 B) 14.2
C) 201.6 D) 11.5

3)



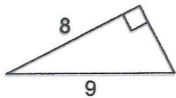
- A) 185 B) 19
C) 13.6 D) 153.8

4)



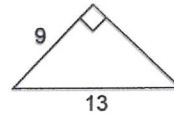
- A) 12 B) 17
C) 9.9 D) 144

5)



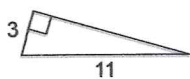
- A) 16.8 B) 1
C) 3.5 D) 4.1

6)



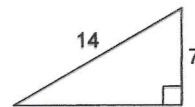
- A) 4 B) 88.4
C) 11.5 D) 9.4

7)



- A) 10.6 B) 94.1
C) 8 D) 112.4

8)



- A) 146.4 B) 14.5
C) 7 D) 12.1