

**A.W. James Elementary  
School**

*ELA & Math*

Independent Learning  
Packets

**Luckett's Kindergarten**

Student Name \_\_\_\_\_

Name: \_\_\_\_\_

## Kindergarten Pack

April 20-April 24, 2020



April 22, 2020

Earth Day is a day to remind us how much harm we do to the Earth. It is also a time for us to think of ways we can fix or stop hurting our home. Here are three simple things you can do:

1. Picked up litter and threw it in the trash.
2. Helped recycle plastic, paper, and cans.
3. Turned off the tv when you have finished watching.

Remember, we all can make a difference.

# Word List

4/20-24

## Sight Word

my	little
on	by
his	in
he	saw
yes	we
for	got
has	be
all	

## Months of the Year

January	February
March	April
May	June
July	August
September	October
November	December

## Days of the Week

Sunday	Monday
Tuesday	Wednesday
Thursday	Friday
Saturday	

## Number Words

one	two	three
four	five	six
seven	eight	nine
ten	zero	

## Color Words

red	orange	yellow
green	blue	purple
white	black	pink
brown		

Date: \_\_\_\_\_

Name: \_\_\_\_\_

MONDAY  
Week 4

### Rhyming Words

Write 2 words that rhyme with the word in the box below.

bat

\_\_\_\_\_

-----

\_\_\_\_\_

-----

\_\_\_\_\_

-----

### Phonics


Look at the pictures and write their names in the boxes below.



\_\_\_\_\_

-----

\_\_\_\_\_



\_\_\_\_\_

-----

\_\_\_\_\_

### Sentence Construction

Directions: Rewrite the sentences correctly.

1. jack ate fries

\_\_\_\_\_

-----

\_\_\_\_\_

2. i went to school

\_\_\_\_\_

-----

\_\_\_\_\_

### Handwriting

Directions: Write each of the letters above the lines.

T U V

t u v

Language Arts

Date: \_\_\_\_\_

Name: \_\_\_\_\_

# MONDAY

## Week 4

### Addition

Find the sum for each of the problems.

1.  $5 + 2 =$  \_\_\_\_\_

2.  $4 + 5 =$  \_\_\_\_\_


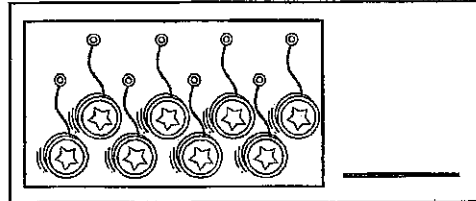
3.  $3 + 6 =$  \_\_\_\_\_

4.  $4 + 3 =$  \_\_\_\_\_

5.  $2 + 4 =$  \_\_\_\_\_

### Counting

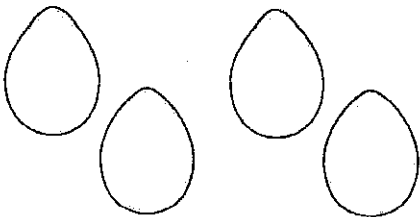
Count the objects in each box. Write the answers on the lines.



Math


### Word Problems

I ate 2 eggs for breakfast and 2 eggs for lunch. How many eggs did I eat in all?



\_\_\_ + \_\_\_ = \_\_\_ eggs

Cam built 2 sandcastles on Monday and 1 sandcastle on Tuesday. How many sandcastles did he build altogether?

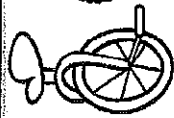




\_\_\_ + \_\_\_ = \_\_\_ sandcastles

p.32

Name: \_\_\_\_\_

If the word has a long vowel, color it red. If it has a short vowel, color it blue.



③

④




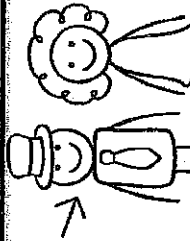
②

③

Count the syllables.

What comes after? \_\_\_\_\_

# Wednesday



\_\_\_\_\_

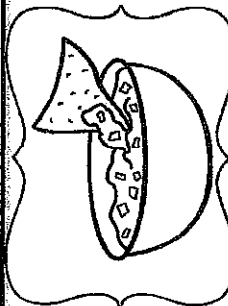
\_\_\_\_\_

\_\_\_\_\_

\_\_\_\_\_

\_\_\_\_\_

Read the word. Then write 3 rhyming words.



# dip

\_\_\_\_\_

\_\_\_\_\_

\_\_\_\_\_

Copy the sentence, correctly.

# the tree iz greenn

\_\_\_\_\_

Date: \_\_\_\_\_

Unscramble the eight words.

ym

eitlhl

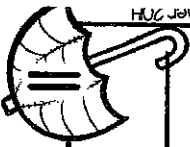
yb

Write the matching number word.


0

What comes before? \_\_\_\_\_

# February



Color it green.



Date: \_\_\_\_\_

Name: \_\_\_\_\_

TUESDAY  
Week 4

### Rhyming Words

Write 2 words that rhyme with the word in the box below.

wag

\_\_\_\_\_

-----


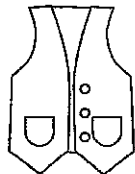
\_\_\_\_\_

-----

\_\_\_\_\_

### Phonics

Circle the beginning sound for each picture.



e s v

u d k

### Sentence Construction

Directions: Rewrite the sentences correctly.

1. he hit the ball

\_\_\_\_\_

-----

\_\_\_\_\_

2. zack likes basketball

\_\_\_\_\_

-----

\_\_\_\_\_

### Handwriting

Directions: Write each of the letters above the lines.

W

X

Y

W

X

Y

Language Arts

Date: \_\_\_\_\_

Name: \_\_\_\_\_

# TUESDAY

Week 4

## Addition

Find the sum for each of the problems.

1.  $6 + 2 =$  \_\_\_\_\_

2.  $0 + 10 =$  \_\_\_\_\_

3.  $5 + 3 =$  \_\_\_\_\_

4.  $5 + 5 =$  \_\_\_\_\_

5.  $2 + 5 =$  \_\_\_\_\_

## Counting

Write in the missing numbers.

\_\_\_\_\_, 20, \_\_\_\_\_, 40, \_\_\_\_\_


\_\_\_\_\_, \_\_\_\_\_, 60, \_\_\_\_\_, \_\_\_\_\_

\_\_\_\_\_, \_\_\_\_\_, 90, \_\_\_\_\_, \_\_\_\_\_

Math


## Word Problems

There were 3 crabs on the beach and 5 crabs in the water. How many crabs were there in all?



\_\_\_\_ + \_\_\_\_ = \_\_\_\_ crabs

I found 1 shell yesterday and 9 shells today. How many shells did I find altogether?



\_\_\_\_ + \_\_\_\_ = \_\_\_\_ shells



Name: \_\_\_\_\_

If the word has a long vowel, color it red. If it has a short vowel, color it blue.



Count the syllables.




①

②

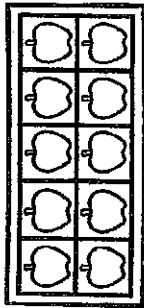
①

③

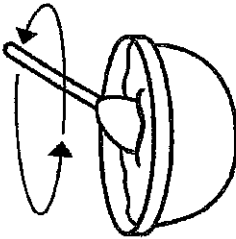


What comes after?


# Thursday




\_\_\_\_\_



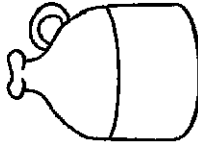
\_\_\_\_\_



\_\_\_\_\_



\_\_\_\_\_



\_\_\_\_\_

Date: \_\_\_\_\_

Unscramble the eight words.

on

sih

ni

Write the matching number word.

1

What comes before?

# March

Read the word. Then write 3 rhyming words.




# fin

Copy the sentence correctly.

# it can fly

Color it your favorite color!



Date: \_\_\_\_\_

Name: \_\_\_\_\_

WEDNESDAY  
Week 4

### Rhyming Words

Write 2 words that rhyme with the word in the box below.

bet

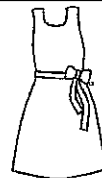
\_\_\_\_\_  
\_\_\_\_\_  
\_\_\_\_\_  
\_\_\_\_\_

### Phonics

Circle the ending sound for each picture.



g p i



d e s

### Sentence Construction

Directions: Rewrite the sentences correctly.

1. my shoes are red

\_\_\_\_\_  
\_\_\_\_\_

2. ken plays soccer

\_\_\_\_\_  
\_\_\_\_\_

### Handwriting

Directions: Write each of the letters above the lines.

Z

A

B

z

a

b

Date: \_\_\_\_\_

Name: \_\_\_\_\_

# WEDNESDAY

## Week 4

### Subtraction

Find the difference for each of the problems.

1.  $10 - 1 =$  \_\_\_\_\_

2.  $6 - 6 =$  \_\_\_\_\_

3.  $4 - 2 =$  \_\_\_\_\_

4.  $7 - 1 =$  \_\_\_\_\_

5.  $3 - 2 =$  \_\_\_\_\_

### Compare Numbers

Circle the smaller number in each box.

12       4

8       6


3       9

5       2

Math


### Word Problems

There are 2 ladybugs on the tree and 4 ladybugs in the grass. How many ladybugs are there in all?



\_\_\_ + \_\_\_ = \_\_\_ ladybugs

Farmer Ben has 1 goat in the barn and 3 in the field. How many goats does he have in all?

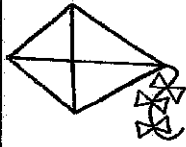


\_\_\_ + \_\_\_ = \_\_\_ goats

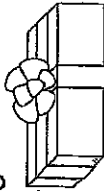
Name: \_\_\_\_\_

Date: \_\_\_\_\_

If the word has a long vowel, color it red. If it has a short vowel, color it blue.



Count the syllables.



①




②

③

④

What comes after?

Friday



\_\_\_\_\_

\_\_\_\_\_

\_\_\_\_\_

\_\_\_\_\_

\_\_\_\_\_

\_\_\_\_\_

\_\_\_\_\_

\_\_\_\_\_

\_\_\_\_\_

What comes before?

April

Write the matching number word.

2

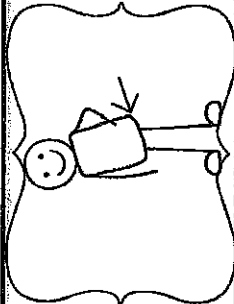
Unscramble the sight words.

eh

swa

sey

Read the word. Then write 3 rhyming words.



hip

\_\_\_\_\_


\_\_\_\_\_

\_\_\_\_\_

Copy the sentence correctly.

i see a blak sheep

Color it black.



Date: \_\_\_\_\_

Name: \_\_\_\_\_

# THURSDAY

Week 4

## Rhyming Words

Write 2 words that rhyme with the word in the box below.

lap

\_\_\_\_\_

-----

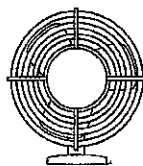
\_\_\_\_\_

-----

\_\_\_\_\_

## Phonics

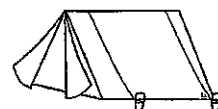
Look at the pictures and write their names in the boxes below.



\_\_\_\_\_

-----

\_\_\_\_\_



\_\_\_\_\_

-----

\_\_\_\_\_

## Sentence Construction

Directions: Rewrite the sentences correctly.

1. my dog likes bones

\_\_\_\_\_

-----

\_\_\_\_\_

2. her ring is gold

\_\_\_\_\_

-----

\_\_\_\_\_

## Handwriting

Directions: Write each of the letters above the lines.

C D E

c d e

Language Arts

Date: \_\_\_\_\_

Name: \_\_\_\_\_

# THURSDAY

## Week 4

### Subtraction

Find the difference for each of the problems.

1.  $7 - 3 =$  \_\_\_\_\_

2.  $5 - 0 =$  \_\_\_\_\_


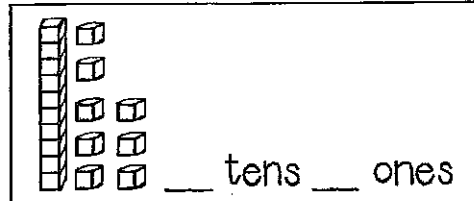
3.  $6 - 2 =$  \_\_\_\_\_

4.  $8 - 4 =$  \_\_\_\_\_

5.  $2 - 1 =$  \_\_\_\_\_

### Place Value


Write how many tens and ones you have for each problem.



Math


### Word Problems

I got 4 gifts from my parents and 1 gift from my sister for my birthday. How many gifts did I get in all?



\_\_\_ + \_\_\_ = \_\_\_ gifts

There were 3 hippos in the water and 3 hippos on the land. How many hippos were there altogether?





\_\_\_ + \_\_\_ = \_\_\_ hippos

p.38

Name: \_\_\_\_\_

Date: \_\_\_\_\_

If the word has a long vowel, color it red. If it has a short vowel, color it blue.



①

②

③

④

Write the matching number word.




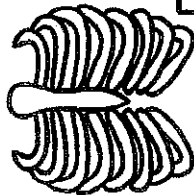
3

What comes after?

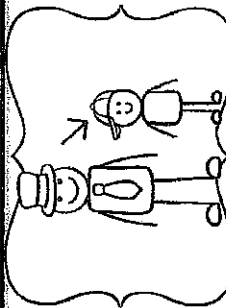
Saturday

What comes before?

May



Read the word. Then write 3 rhyming words.



kid

\_\_\_\_\_

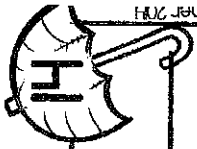

-----

\_\_\_\_\_

Copy the sentence, correctly.

the bird is purple

Color it purple.



tog

rfo

ew

Date: \_\_\_\_\_

Name: \_\_\_\_\_

FRIDAY  
Week 4

## Reading Comprehension

Meg put the seed in dirt. Next, she added water. Then, she placed the plant in the sun.

1. What is this story about?

\_\_\_\_\_  
\_\_\_\_\_  
\_\_\_\_\_  
\_\_\_\_\_

2. What do you think happened last?

\_\_\_\_\_  
\_\_\_\_\_  
\_\_\_\_\_  
\_\_\_\_\_

## Sentence Construction

Directions: Rewrite the sentences correctly.

1. they drank milk

\_\_\_\_\_  
\_\_\_\_\_  
\_\_\_\_\_

2. rick has blue eyes

\_\_\_\_\_  
\_\_\_\_\_  
\_\_\_\_\_

## Handwriting

Directions: Write each of the letters above the lines.

F G H

f g h

Language Arts



Date: \_\_\_\_\_

Name: \_\_\_\_\_



## Addition

Find the sum for each of the problems.

1.  $4 + 6 =$  \_\_\_\_\_

2.  $6 + 0 =$  \_\_\_\_\_

3.  $5 + 3 =$  \_\_\_\_\_

4.  $7 + 1 =$  \_\_\_\_\_

5.  $2 + 2 =$  \_\_\_\_\_

## Counting

Follow directions in the box below.

Draw 8 flowers.

Math

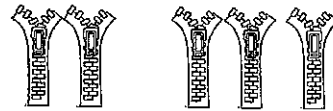
## Word Problems

Maggie had 2 monkeys and Tom had 1 monkey. How many monkeys were there in all?



\_\_\_ + \_\_\_ = \_\_\_ monkeys

Tom's shoes have 2 zippers and Lisa's shoes have 3 zippers. How many zippers are there altogether?

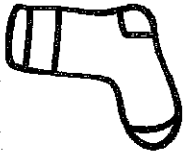
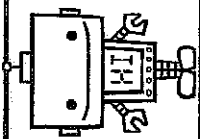


\_\_\_ + \_\_\_ = \_\_\_ zippers

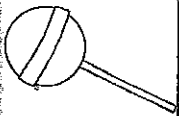
Name: \_\_\_\_\_

Date: \_\_\_\_\_

If the word has a long vowel, color it red. If it has a short vowel, color it blue.



Count the syllables.



①

②

③

④

What comes after?

Sunday

What comes before?

June

Write the matching number word.


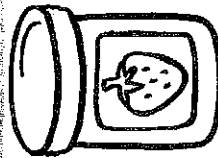
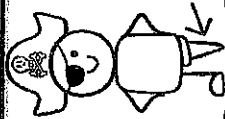
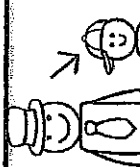
4

Unscramble the sight words.

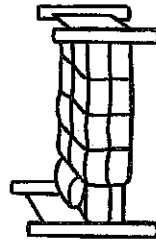
sh

al

eb



Read the word. Then write 3 rhyming words.



bed

\_\_\_\_\_  
\_\_\_\_\_  
\_\_\_\_\_

Copy the sentence, correctly.

we see a ladybug

Color it red.

