

Daily Math Review – Week #1 – Monday

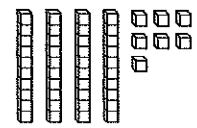
Name: _____ Date: _____

Ⓐ Fill in the missing sign: $<$, $>$, or $=$.

Double 5 _____ 12 $3+9$ _____ $4+8$

16 _____ $8+8$ $5+9$ _____ $6+7$

Ⓑ What is this number?



_____ + _____ = _____


Ⓒ Look at this number: 92

How many ones are there? _____

How many tens are there? _____

Is it even or odd? _____

Ⓓ How much money?



_____ ¢

Ⓔ Solve these problems:

$9 + 9 =$ _____ $8 + 5 - 4 =$ _____

$8 - 5 + 3 - 4 =$ _____ $12 + 8 =$ _____

Ⓕ Circle the even numbers:

82 69 57 36 10 24 71 95

Ⓖ Fill in the missing numbers:

36, 38, 40, 42, _____, _____, 48, 50, _____, 54

47, 46, 45, 44, _____, _____, 41, 40, 39, _____

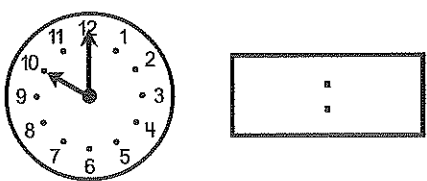
Ⓖ Answer these questions:

What number is one more than 84? _____


What number is five more than 65? _____

What number is ten less than 70? _____

Ⓘ What time is it?



Ⓙ How long is the line? _____ in.



Daily Math Review – Week #1 – Tuesday

Name: _____ Date: _____

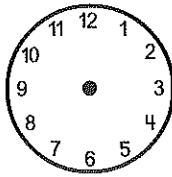
Ⓐ Fill in the missing numbers:

$\underline{\quad} + 8 = 13$ $5 + \underline{\quad} = 11$
 $4 + \underline{\quad} = 10$ $\underline{\quad} + 3 = 9$

Ⓑ Solve this story problem. Show your work.

Emily had 2 dogs, 3 cats, and 5 fish. How many pets did she have in all? _____

Ⓒ Make the clock say 10:30.



Ⓓ Name the shapes:



Ⓔ Write the opposite number sentence for

$10 - 7 = 3$

Ⓕ Put these numbers in order, least to greatest:

69 58 23 45 52 34

Ⓖ Look at the graph and answer the questions:

Our Favorite Foods										
pizza	X	X	X	X	X	X	X	X		
spaghetti	X	X	X	X	X					
tacos	X	X	X	X	X	X				
hot dogs	X	X								

1. What did most people choose? _____ fewest people? _____
2. How many more people chose pizza than spaghetti? _____
3. How many more people prefer pizza than tacos? _____
4. How many fewer people chose hot dogs than tacos? _____

Daily Math Review – Week #1 – Wednesday

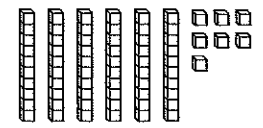
Name: _____ Date: _____

Ⓐ Fill in the missing sign: $<$, $>$, or $=$.

Double 3 _____ 5 $3+5$ _____ $4+9$

14 _____ $8+7$ $4+9$ _____ $6+7$

Ⓑ What is this number?



_____ + _____ = _____


Ⓒ Look at this number: 85

How many ones are there? _____

How many tens are there? _____

Is it even or odd? _____

Ⓓ How much money?



_____ ¢

Ⓔ Solve these problems:

$7 + 7 =$ _____ $8 + 6 - 5 =$ _____

$9 - 5 + 4 - 6 =$ _____ $11 + 8 =$ _____

Ⓕ Circle the odd numbers:

55 49 34 28 70 76 21

Ⓖ Fill in the missing numbers:

22, 24, 26, _____, _____, 32, 34, _____, 38

39, 38, 37, 36, _____, _____, 33, 32, 31, _____

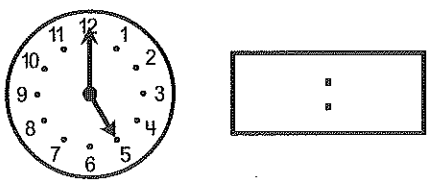
Ⓖ Answer these questions:

What number is one less than 84? _____

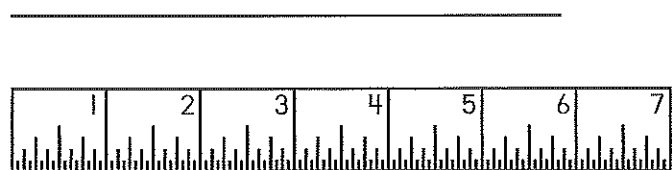
What number is five less than 65? _____

What number is ten more than 70? _____

Ⓘ What time is it?



Ⓙ How long is the line? _____ in.



Daily Math Review – Week #1 – Thursday

Name: _____ Date: _____

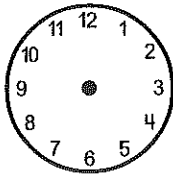
Ⓐ Fill in the missing numbers:

$\underline{\quad} + 8 = 10$ $5 + \underline{\quad} = 9$
 $4 + \underline{\quad} = 8$ $\underline{\quad} + 7 = 9$

Ⓑ Solve this story problem. Show your work.

Emily had 4 dogs, 2 cats, and 8 fish. How many pets did she have in all? _____

Ⓒ Make the clock say 7:30.



Ⓓ Name the shapes:



Ⓔ Write the opposite number sentence for

$4 + 6 = 10$

Ⓕ Put these numbers in order, least to greatest:

91 48 26 75 70 68

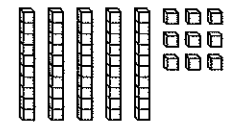

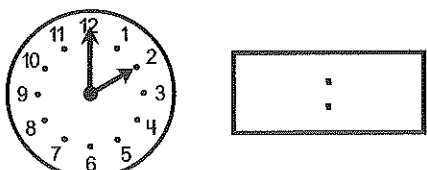
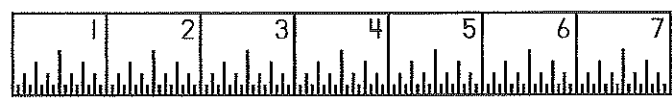
Ⓖ Look at the graph and answer the questions:

Our Favorite Foods										
pizza	X	X	X							
spaghetti	X	X	X	X	X	X	X	X		
tacos	X	X	X	X	X					
hot dogs	X	X	X	X						

1. What did most people choose? _____ fewest people? _____
2. How many fewer people chose pizza than spaghetti? _____
3. How many more people prefer tacos than pizza? _____
4. How many fewer people chose hot dogs than tacos? _____

Weekly Math Quiz – Week #1 – Page 1

Name: _____ Date: _____

<p>Ⓐ Fill in the missing sign: $<$, $>$, or $=$.</p> <p>Double 2 _____ 6 $3+6$ _____ $4+5$</p> <p>12 _____ $6+6$ $4+8$ _____ $6+5$</p>	<p>Ⓑ What is this number?</p>  <p>_____</p> <p>_____ + _____ = _____</p>
<p>Ⓒ Look at this number: 74</p> <p>How many ones are there? _____</p> <p>How many tens are there? _____</p> <p>Is it even or odd? _____</p>	<p>Ⓓ How much money?</p>  <p>_____ ¢</p>
<p>Ⓔ Solve these problems:</p> <p>$5 + 5 =$ _____ $7 + 6 - 5 =$ _____</p> <p>$9 - 3 + 4 - 2 =$ _____ $9 + 8 =$ _____</p>	<p>Ⓕ Circle the <u>even</u> numbers:</p> <p>85 29 94 18 20 66 31</p>
<p>Ⓖ Fill in the missing numbers:</p> <p>26, 28, 30, 32, _____, _____, 38, 40, _____, 44</p> <p>59, 58, 57, 56, _____, _____, 53, 52, 51, _____</p>	<p>Ⓖ Answer these questions:</p> <p>What number is one less than 24? _____</p> <p>What number is five less than 45? _____</p> <p>What number is ten more than 40? _____</p>
<p>Ⓘ What time is it?</p> 	<p>Ⓙ How long is the line? _____ in.</p> 

Weekly Math Quiz – Week #1 – Page 2

Ⓚ Fill in the missing numbers:

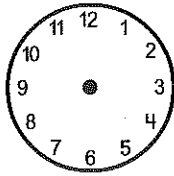
_____ + 5 = 10 5 + _____ = 8

4 + _____ = 6 _____ + 2 = 9

Ⓛ Solve this story problem. Show your work.

Emily had 2 dogs, 4 cats, and 6 fish. How many pets did she have in all? _____

Ⓜ Make the clock say 4:30.



Ⓝ Name the shapes:



Ⓞ Write the opposite number sentence for

$5 + 4 = 9$

Ⓟ Put these numbers in order, least to greatest:

81 38 46 95 30 58

Ⓠ Look at the graph and answer the questions:

Our Favorite Foods										
pizza	X	X	X	X	X	X				
spaghetti	X	X	X	X	X	X	X	X		
tacos	X	X	X	X	X					
hot dogs	X	X	X	X						

1. What did most people choose? _____ fewest people? _____

2. How many fewer people chose pizza than spaghetti? _____

3. How many more people prefer pizza than tacos? _____

4. How many fewer people chose hot dogs than tacos? _____

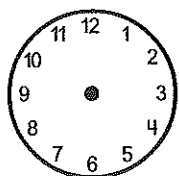
Daily Math Review – Week #2 – Monday

Name: _____ Date: _____

Ⓐ Finish the pattern:
A B C D C A B C D C _____

Ⓑ Solve this story problem. Show your work.
Sydney had 8 books. Her mom gave her some more, then she had 13 in all. How many did her mom give her? _____

Ⓒ Make the clock say 12:30.



Ⓓ Circle all the numbers greater than 85.

82 75 91 103 89 95 84 87

Ⓔ Circle the odd numbers.

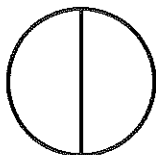
71 84 66 93 52 77 43 80

Ⓕ Fill in the missing numbers:

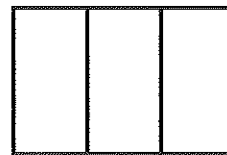
$4 + \underline{\quad} = 13$ $9 + \underline{\quad} = 16$

$\underline{\quad} + 6 = 17$ $\underline{\quad} + 8 = 16$

Ⓖ Color $\frac{1}{2}$ of the circle.



Ⓖ Color $\frac{1}{3}$ of the rectangle.



Ⓘ Write the numbers:

eighty-two _____ ninety-five _____





forty-nine _____ fifty-six _____

Ⓙ If you measured a line with different objects, laid end to end and touching each other, circle the object you would use the most of:

jelly beans pencils gift cards

Daily Math Review – Week #2 – Tuesday

Name: _____ Date: _____

<p>(A) Color the sixth circle:</p> 	<p>(B) Write equations using 7, 8, and 15.</p> <p>____ + ____ = ____ ____ + ____ = ____</p> <p>____ - ____ = ____ ____ - ____ = ____</p>								
<p>(C) Name the solid figures:</p>  <p>_____</p>	<p>(D) Solve these equations:</p> <table style="width: 100%; text-align: center;"> <tr> <td>45</td> <td>73</td> <td>96</td> <td>75</td> </tr> <tr> <td><u>+33</u></td> <td><u>+16</u></td> <td><u>-35</u></td> <td><u>-42</u></td> </tr> </table>	45	73	96	75	<u>+33</u>	<u>+16</u>	<u>-35</u>	<u>-42</u>
45	73	96	75						
<u>+33</u>	<u>+16</u>	<u>-35</u>	<u>-42</u>						
<p>(E) Fill in the missing sign: <, >, or =.</p> <p>36 _____ 30+6 Double 8 _____ 17</p> <p>5+6 _____ 5+4 45 _____ 54</p>	<p>(F) Look at this number: 98</p> <p>How many ones are there? _____</p> <p>How many tens are there? _____</p> <p>Is it even or odd? _____</p>								
<p>(G) How much money?</p>  <p>_____ ¢</p>	<p>(H) Draw 45¢.</p>								
<p>(I) Name the shapes:</p>  <p>_____</p>	<p>(J) Fill in the missing signs: + or - .</p> <p>4 ○ 10 = 14 14 ○ 9 = 5</p> <p>16 ○ 8 = 8 5 ○ 8 = 13</p>								

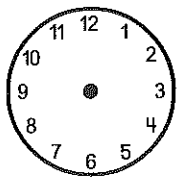
Daily Math Review – Week #2 – Wednesday

Name: _____ Date: _____

(A) Finish the pattern:
A B C B D A B C B D _____

(B) Solve this story problem. Show your work.
Sydney had 6 books. Her mom gave her some more, then she had 10 in all. How many did her mom give her? _____

(C) Make the clock say 2:30.

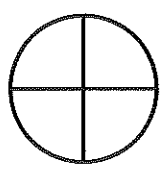


(D) Circle all the numbers greater than 80.
82 75 91 103 79 95 84 67

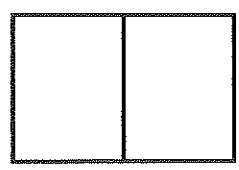
(E) Circle the even numbers.
80 75 62 87 21 94 106 49

(F) Fill in the missing numbers:
 $6 + \underline{\quad} = 13$ $12 + \underline{\quad} = 16$
 $\underline{\quad} + 6 = 15$ $\underline{\quad} + 8 = 12$

(G) Color $\frac{1}{4}$ of the circle.



(H) Color $\frac{1}{2}$ of the rectangle.







(I) Write the numbers:
eighty-five _____ twenty-five _____
forty _____ sixteen _____

(J) If you measured a line with different objects, laid end to end and touching each other, circle the object you would use the most of:
straws peanuts toy cars

Daily Math Review – Week #2 – Thursday

Name: _____ Date: _____

<p>(A) Color the second circle:</p> 	<p>(B) Write equations using 3, 6, and 9.</p> <p>___ + ___ = ___ ___ + ___ = ___</p> <p>___ - ___ = ___ ___ - ___ = ___</p>								
<p>(C) Name the solid figures:</p>  <p>_____</p>	<p>(D) Solve these equations:</p> <table style="width: 100%; text-align: center;"> <tr> <td>36</td> <td>21</td> <td>78</td> <td>99</td> </tr> <tr> <td><u>+33</u></td> <td><u>+16</u></td> <td><u>-35</u></td> <td><u>-42</u></td> </tr> </table>	36	21	78	99	<u>+33</u>	<u>+16</u>	<u>-35</u>	<u>-42</u>
36	21	78	99						
<u>+33</u>	<u>+16</u>	<u>-35</u>	<u>-42</u>						
<p>(E) Fill in the missing sign: <, >, or =.</p> <p>45 _____ 40+5 Double 7 _____ 15</p> <p>7+6 _____ 5+7 87 _____ 78</p>	<p>(F) Look at this number: 56</p> <p>How many ones are there? _____</p> <p>How many tens are there? _____</p> <p>Is it even or odd? _____</p>								
<p>(G) How much money?</p>  <p>_____ ¢</p>	<p>(H) Draw 27¢.</p>								
<p>(I) Name the shapes:</p>  <p>_____</p>	<p>(J) Fill in the missing signs: + or - .</p> <p>6 ○ 10 = 16 15 ○ 7 = 8</p> <p>1 ○ 8 = 9 10 ○ 5 = 15</p>								

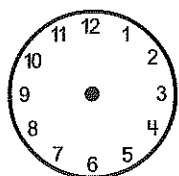
Weekly Math Quiz – Week #2 – Page 1

Name: _____ Date: _____

(A) Finish the pattern:
A B C D B A B C D B _____

(B) Solve this story problem. Show your work.
Sydney had 9 books. Her mom gave her some more, then she had 15 in all. How many did her mom give her? _____

(C) Make the clock say 8:30.



(D) Circle all the numbers greater than 75.

82 72 91 103 69 95 74 77

(E) Circle the even numbers.

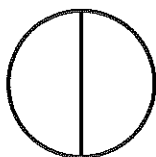
75 54 89 61 38 32 90 43

(F) Fill in the missing numbers:

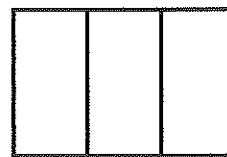
$4 + \underline{\quad} = 11$ $9 + \underline{\quad} = 13$

$\underline{\quad} + 6 = 12$ $\underline{\quad} + 10 = 16$

(G) Color $\frac{1}{2}$ of the circle.



(H) Color $\frac{1}{3}$ of the rectangle.



(I) Write the numbers:

seventy-two _____ fifty-five _____

forty-eight _____ twenty-six _____

(J) If you measured a line with different objects, laid end to end and touching each other, circle the object you would use the most of:

jelly beans straws toy cars

Weekly Math Quiz – Week #2 –Page 2

Ⓚ Color the fourth circle:



Ⓛ Write equations using 4, 8, and 12.

$$\underline{\quad} + \underline{\quad} = \underline{\quad} \quad \underline{\quad} + \underline{\quad} = \underline{\quad}$$

$$\underline{\quad} - \underline{\quad} = \underline{\quad} \quad \underline{\quad} - \underline{\quad} = \underline{\quad}$$

Ⓜ Name the solid figures:



Ⓝ Solve these equations:

$$\begin{array}{r} 42 \\ +33 \\ \hline \end{array} \quad \begin{array}{r} 73 \\ +15 \\ \hline \end{array} \quad \begin{array}{r} 96 \\ -34 \\ \hline \end{array} \quad \begin{array}{r} 75 \\ -41 \\ \hline \end{array}$$

Ⓞ Fill in the missing sign: <, >, or =.

46 _____ 40+6 Double 9 _____ 17

5+6 _____ 5+7 48 _____ 84

Ⓟ Look at this number: 37

How many ones are there? _____

How many tens are there? _____

Is it even or odd? _____

Ⓠ How much money?



_____ ¢

Ⓡ Draw 25¢.

Ⓢ Name the shapes:



Ⓣ Fill in the missing signs: + or - .

14 ○ 2 = 12 4 ○ 4 = 8

14 ○ 7 = 7 5 ○ 6 = 11