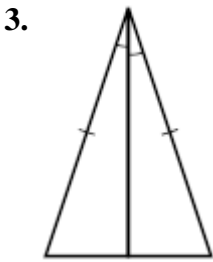
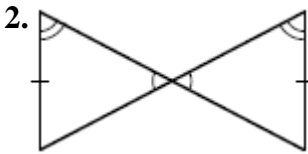
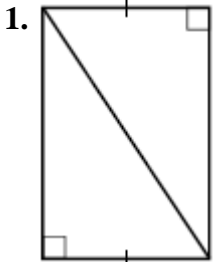


**CHAPTER
4**

Assignment 35 Lesson 4.5 thru 4.7

Decide which method, SAS, ASA, AAS, or HL, can be used to prove the triangles are congruent.



Answers

1. _____

2. _____

3. _____