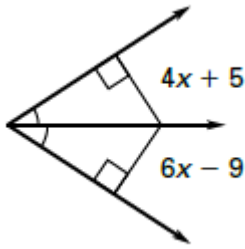


Assignment 45 Lesson 5.3 thru 5.4 Quiz

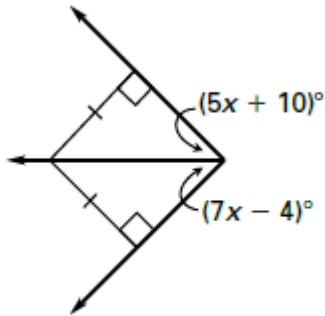
For use after the lessons "Use Angle Bisectors of Triangles" and "Use Medians and Altitudes"

Find the value of x .

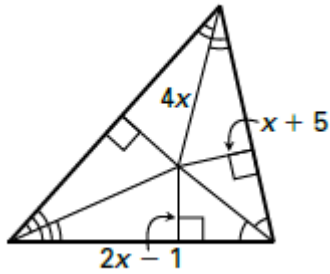
1.



2.



3.



Answers

1. _____

2. _____

3. _____

4. _____

5. _____

In the figure, P is the centroid of $\triangle ABC$ and $BP = 8$.

4. Find the length of \overline{BF} .

5. Find the length of \overline{FP} .

