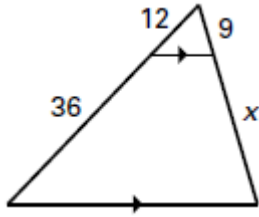


Assignment 57 Lesson 6.5 thru 6.6 Quiz

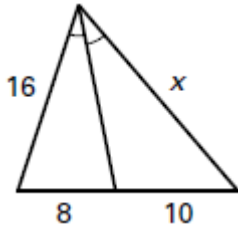
Show all work for full credit. No work No Credit

Find the value of x .

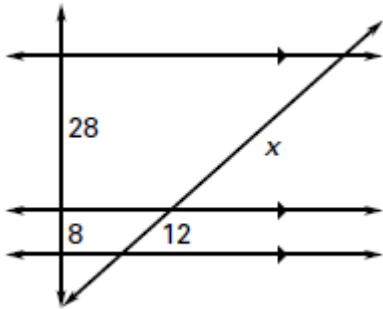
1.



2.



3.



Answers

1. _____

2. _____

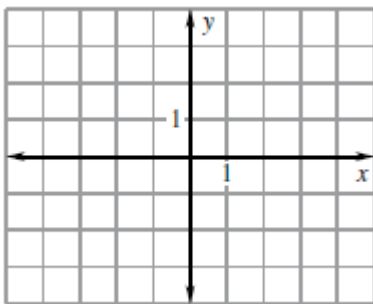
3. _____

4. _____

5. _____

Draw a dilation of $\triangle ABC$ with the given vertices and the scale factor k .

4. $A(-6, 6), B(-6, -6), C(8, 0); k = 0.5$



5. $A(4, -2), B(8, -2), C(4, -8); k = 1.5$

