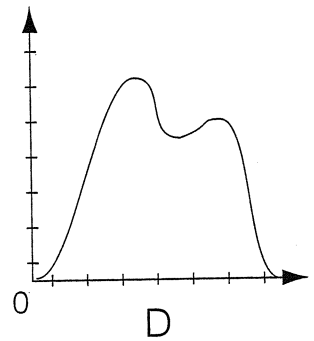
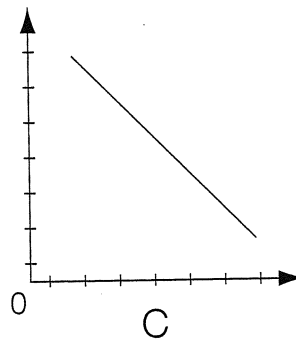
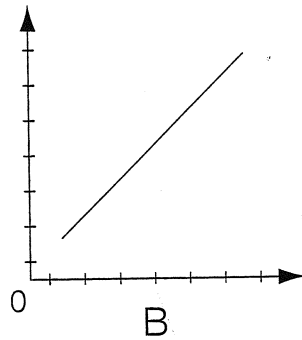
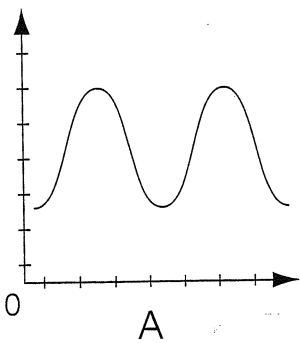


Graphic Stories (continued)

Name _____

Match each story with one of the graphs. One graph does not match any of the stories.

1. The Technocool Club volunteered to pick up trash at the local public beach. The amount of time needed to complete the job is related to the number of club members picking up trash.
2. The height of the water in a bay rises and falls with the tides. The height of the water is related to the time of day.
3. Suzanne starts a race very fast from the starting line. About halfway through the race, she begins to get tired and slows down, but she continues at a pace to keep up with the other runners. When she sees the finish line, she speeds up again, and after crossing it, she stops.



Story 1 matches graph ____.
Explain why they match. _____

Story 2 matches graph ____.
Explain why they match. _____

Story 3 matches graph ____.
Explain why they match. _____
