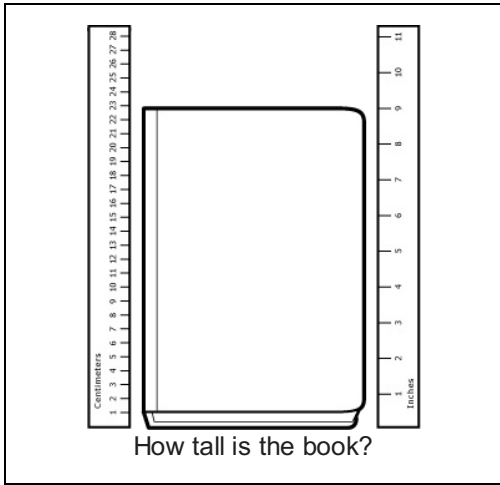


Math Measurement 2_1

Student Name: _____

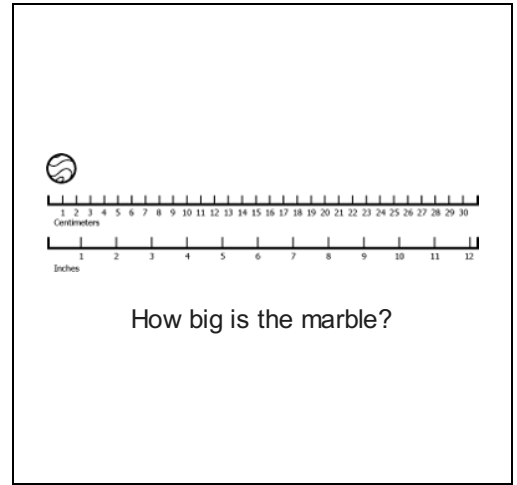
Date: _____

1.



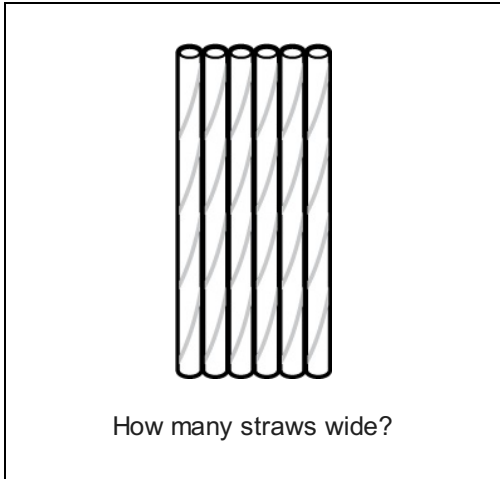
- A. 25 cm
- B. 10 in
- C. 9 in

2.



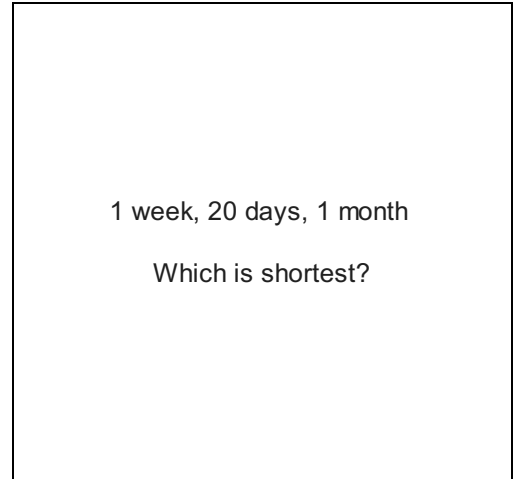
- A. 2 cm
- B. 4 in
- C. 3 cm

3.



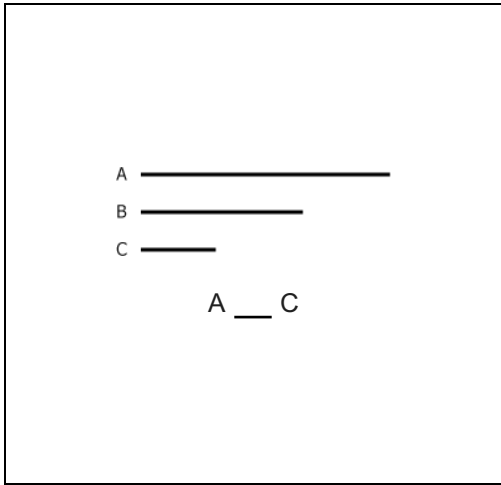
- A. 7
- B. 6
- C. 5

4.



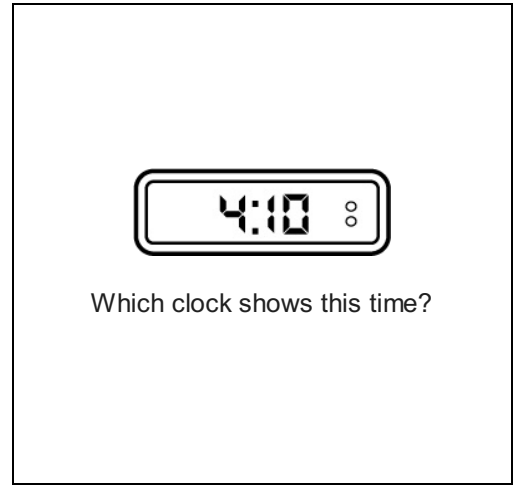
- A. 1 month
- B. 1 week
- C. 20 days




5.



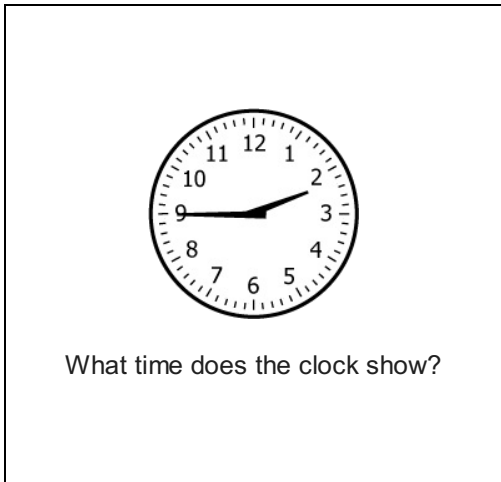
- A. =
- B. >
- C. <

6.



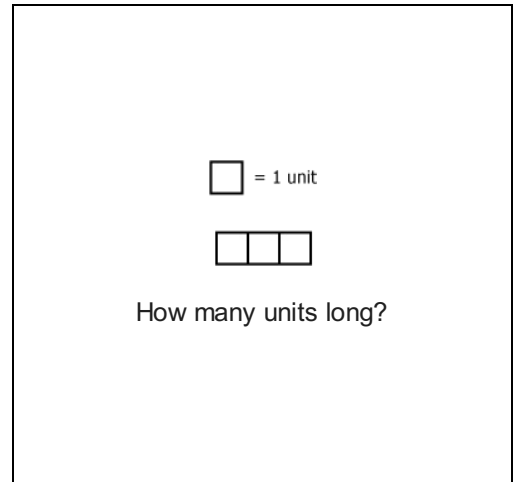
- A. 
- B. 
- C. 

7.



- A. 2:40
- B. 2:45
- C. 2:50

8.



- A. 3
- B. 5
- C. 4

9.

To measure a house fly you would use:

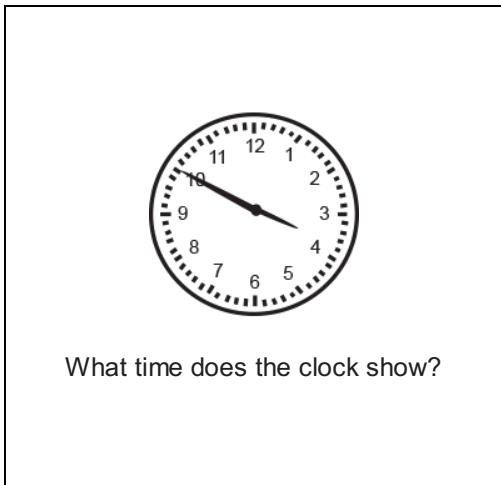
- A. millimeters
- B. feet
- C. meters

10.

66 minutes ___ 1 hour

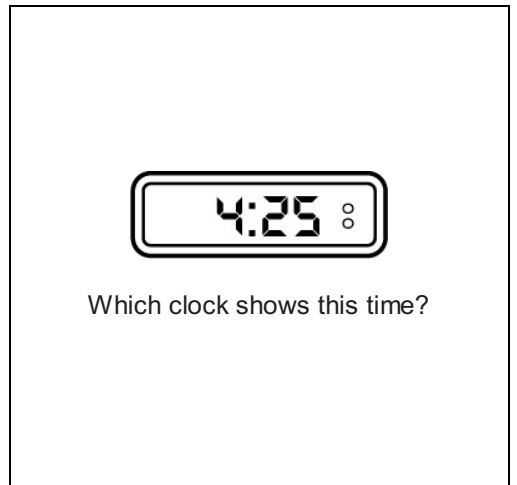
- A. >
- B. <
- C. =




11.



- A. 3:55
- B. 3:45
- C. 3:50

12.



- A. 
- B. 
- C. 

13.

5 weeks, 1 month, 1 year
Which is shortest?

- A. 1 year
- B. 1 month
- C. 5 weeks

14.

1 hour, 55 minutes, $1\frac{1}{2}$ hour
Which is shortest?


- A. 55 minutes
- B. 1 hour
- C. $1\frac{1}{2}$ hour

15.

1 week ___ 6 days

- A. <
- B. >
- C. =

16.



How many units wide?

- A. 11
- B. 9
- C. 10