


Math Measurement 2_3

Student Name: _____

Date: _____


1.



How many units long?

- A. 7
- B. 8
- C. 9

2.

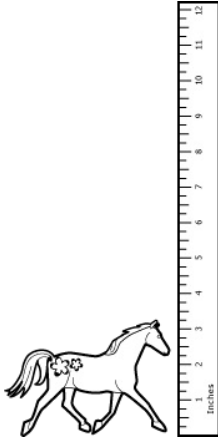


What time does the clock show?

- A. 3:30
- B. 3:35
- C. 3:25

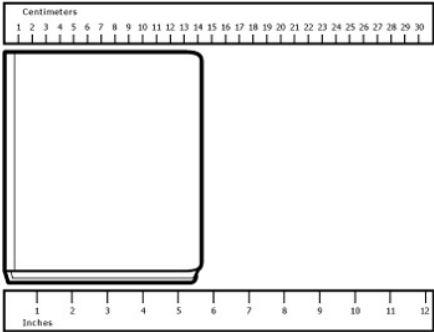
3.

About how tall is the toy horse?



- A. 4 in
- B. 2 in
- C. 3 in

4.



How wide is the book?

- A. 14 cm
- B. 16 cm
- C. 5 in

5.

1 year, 14 months, 30 weeks

Which is longest?

- A. 30 weeks
- B. 1 year
- C. 14 months


6.

5 seconds, 5 minutes, 1 hour

Which is longest?

- A. 1 hour
- B. 5 seconds
- C. 5 minutes

7.



Centimeters

1 2 3 4 5 6 7 8 9 10 11 12 13 14 15 16 17 18 19 20 21 22 23 24 25 26 27 28 29 30


Inches

1 2 3 4 5 6 7 8 9 10 11 12

How long is the toy car?

- A. 22 cm
- B. 11 in
- C. 10 in

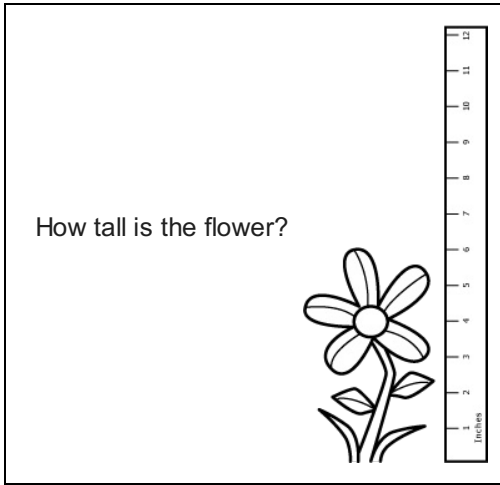
8.



What time does the clock show?

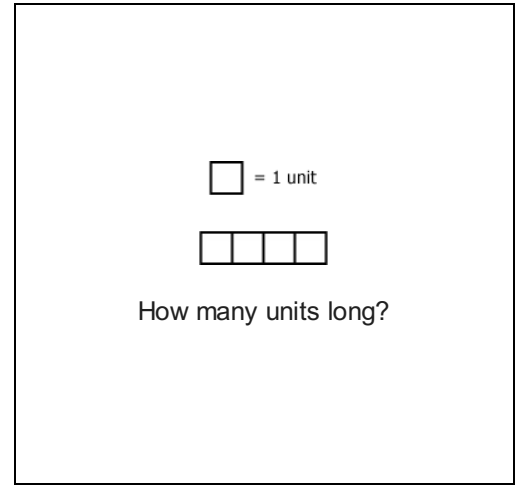
- A. 3:05
- B. 2:15
- C. 3:10

9.



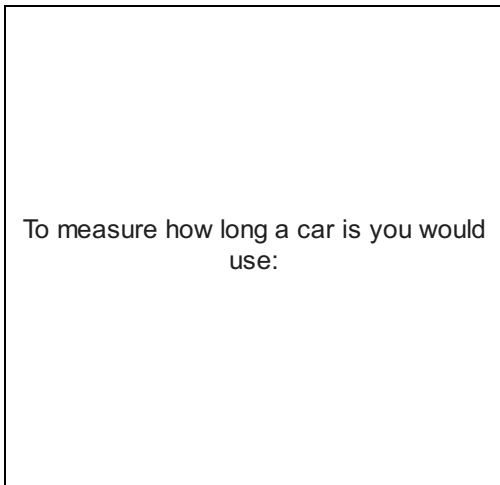
- A. 7 in
- B. 5 in
- C. 6 in

10.



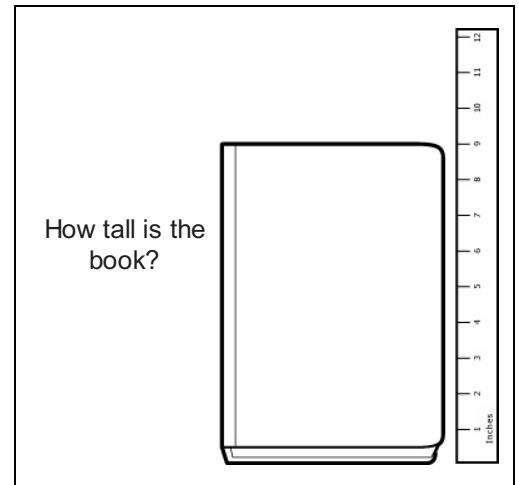
- A. 6
- B. 5
- C. 4

11.



- A. kilometers
- B. miles
- C. feet

12.



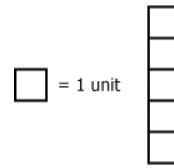
- A. 8 in
- B. 10 in
- C. 9 in

13.

To measure how tall a desk is you would use:

- A. miles
- B. yards
- C. centimeters

14.



How many units tall?

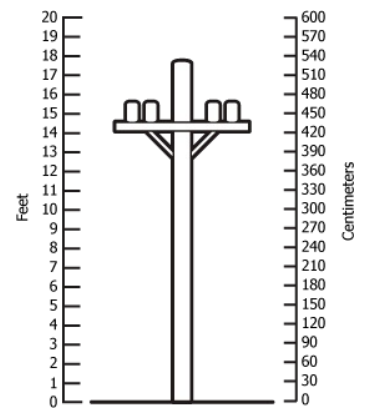
- A. 6
- B. 5
- C. 7

15.

6 weeks, 1 month, 38 days
Which is shortest?

- A. 1 month
- B. 6 weeks
- C. 38 days

16.



How tall is the telephone pole?

- A. 18 ft
- B. 12 ft
- C. 400 cm