


Math Measurement 2_4

Student Name: _____

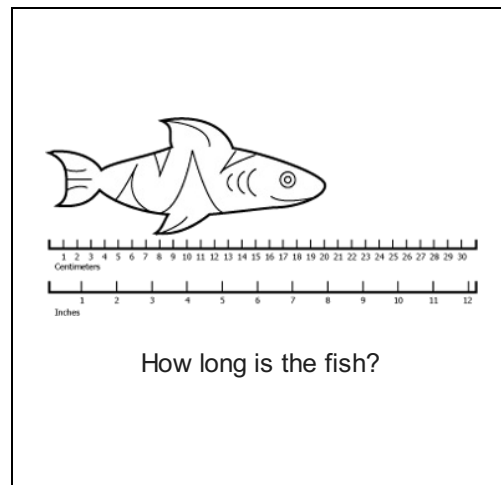
Date: _____

1.



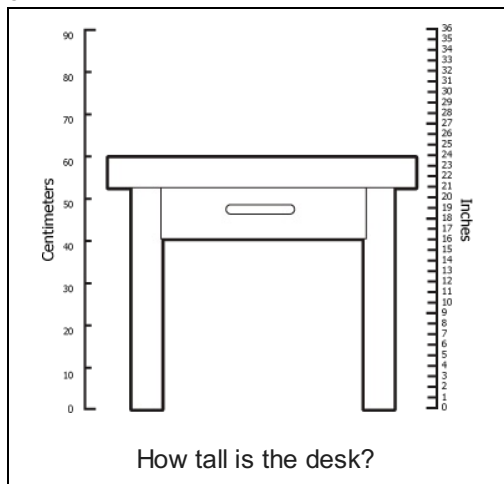
- A. 3
- B. 4
- C. 5

2.



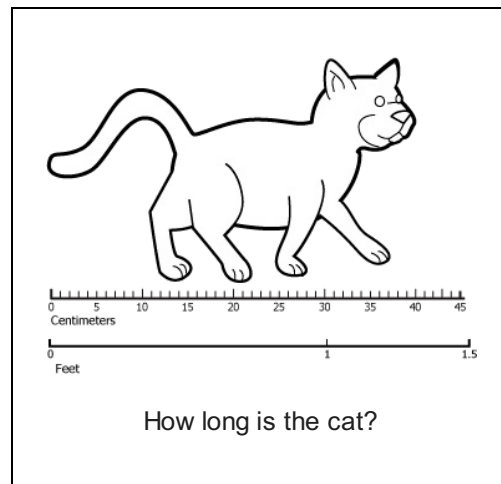
- A. 7 in
- B. 23 cm
- C. 20 cm

3.



- A. 60 cm
- B. 27 in
- C. 50 cm

4.



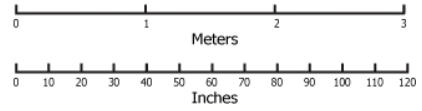

- A. 44 cm
- B. 1 ft
- C. 40 cm

5.

To measure how long a soccer field is you would use:

- A. meters
- B. kilometers
- C. inches

6.



How long is the car?

- A. 140 in
- B. 4 m
- C. 3 m

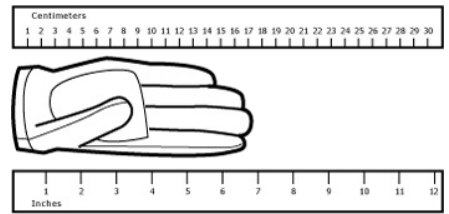
7.



What time does the clock show?

- A. 2:15
- B. 2:20
- C. 3:10

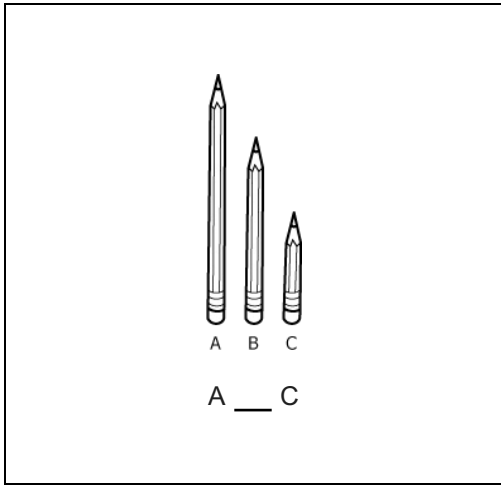
8.



How long is the glove?

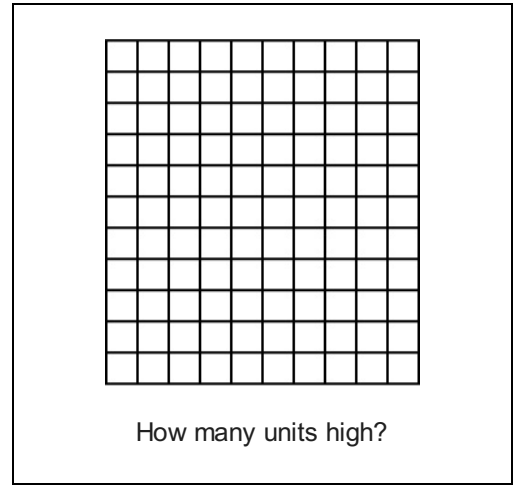
- A. 19 cm
- B. 17 cm
- C. 6 in

9.




- A. =
- B. >
- C. <

10.



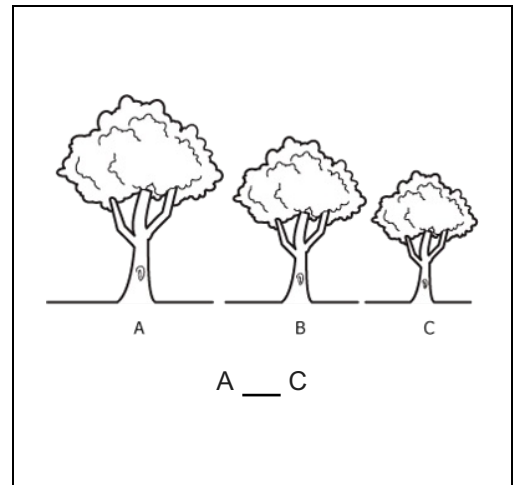
- A. 12
- B. 13
- C. 11

11.



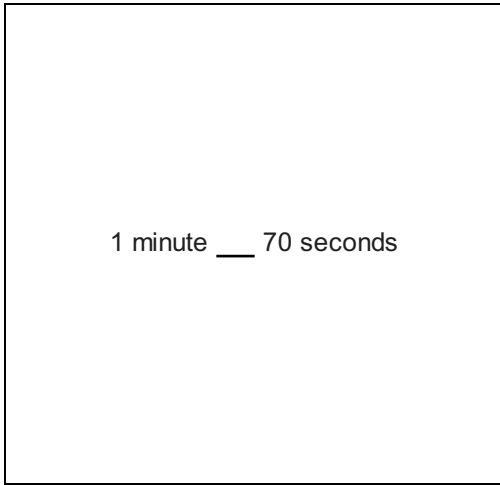
- A. 3:25
- B. 3:15
- C. 3:20

12.



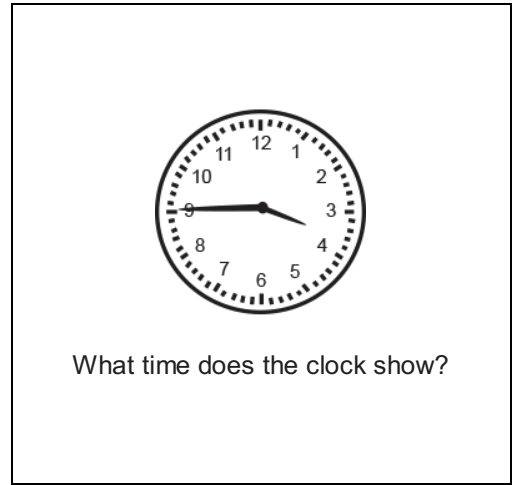
- A. >
- B. <
- C. =

13.



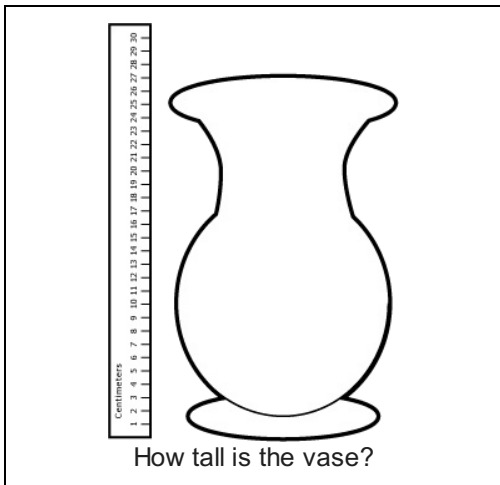
- A. <
- B. >
- C. =

14.



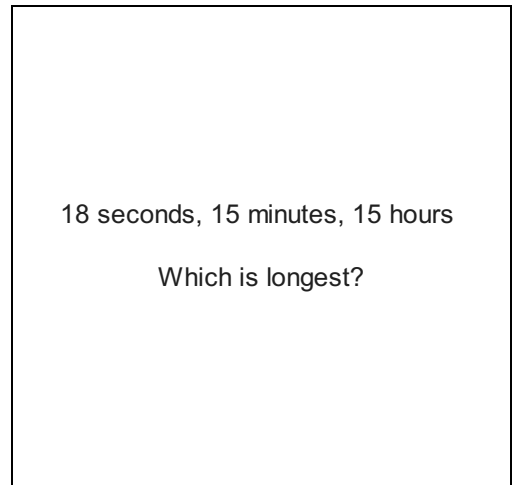
- A. 9:15
- B. 3:50
- C. 3:45

15.



- A. 26 cm
- B. 28 cm
- C. 27 cm

16.



- A. 18 seconds
- B. 15 hours
- C. 15 minutes