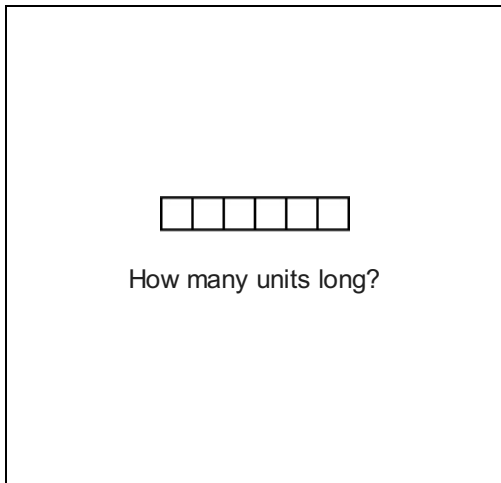


Math Measurement 2_6

Student Name: _____

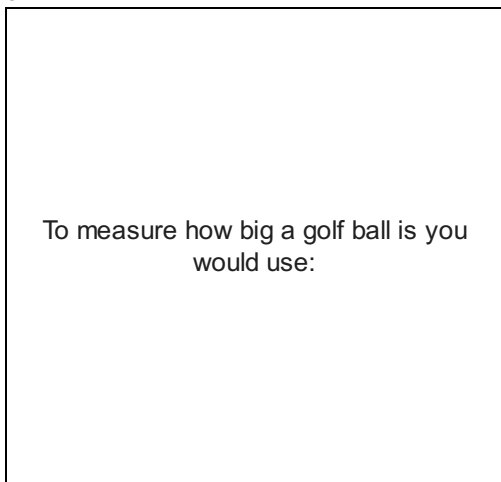
Date: _____

1.



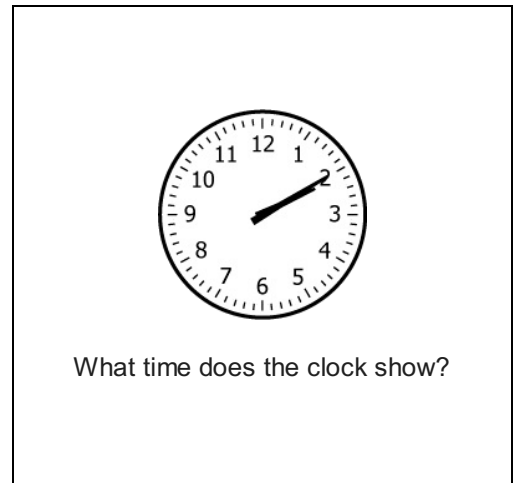
- A. 5
- B. 6
- C. 7

3.



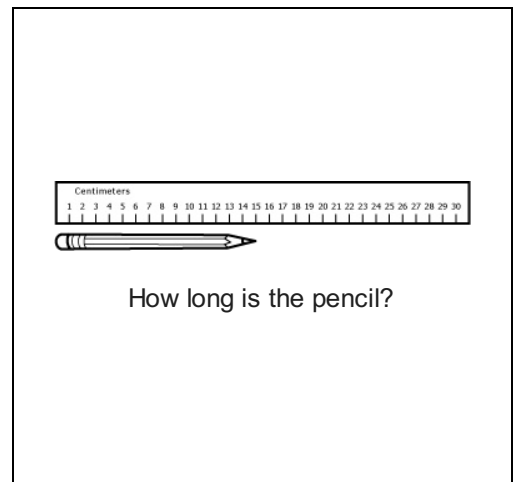
- A. meters
- B. feet
- C. inches

2.



- A. 2:10
- B. 2:15
- C. 2:05

4.



- A. 15 cm
- B. 16 cm
- C. 14 cm

5.

37 days ___ 1 month

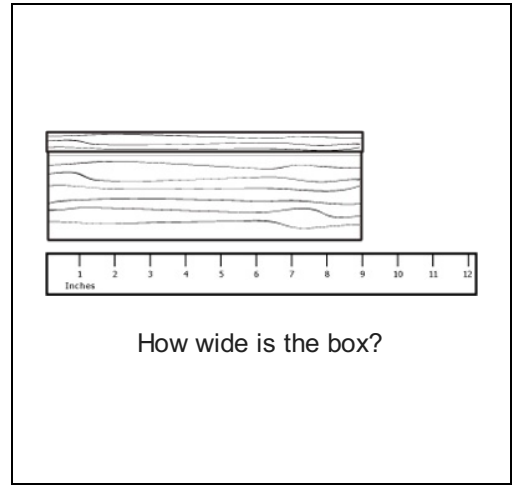
- A. >
- B. <
- C. =

7.

1 minute ___ 60 seconds

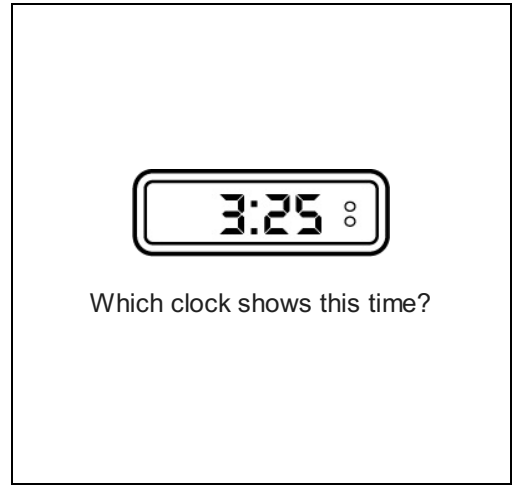
- A. >
- B. =
- C. <




6.



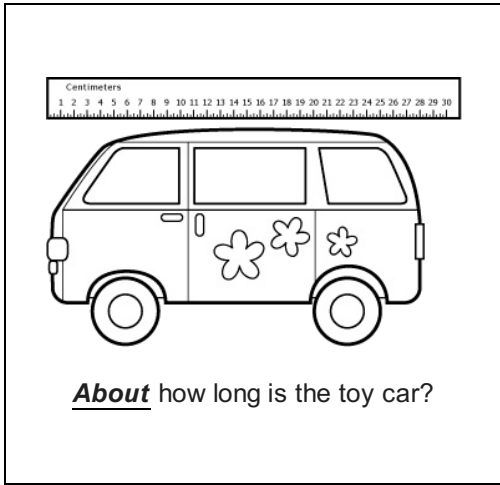
- A. 9 in
- B. 8 in
- C. 10 in

8.



- A. 
- B. 
- C. 

9.



About how long is the toy car?

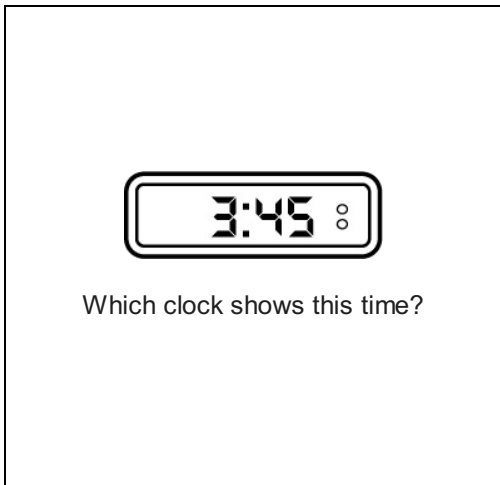
- A. 29 cm
- B. 27 cm
- C. 28 cm




10.

55 days ___ 1 month

- A. >
- B. <
- C. =

11.




- A. 
- B. 
- C. 

12.




27 days ___ 1 month

- A. =
- B. >
- C. <


13.



Which clock shows this time?

- A. 
- B. 
- C. 


14.



How many units wide?

- A. 11
- B. 12
- C. 10


15.



What time does the clock show?

- A. 4:35
- B. 4:40
- C. 4:30

16.



What time does the clock show?

- A. 4:00
- B. 3:50
- C. 3:55