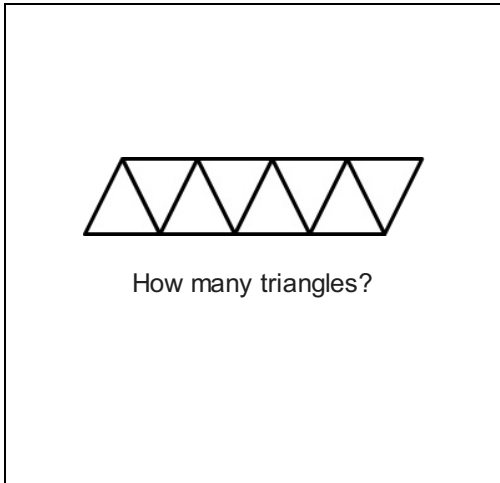


Math Measurement 4_1

Student Name: _____

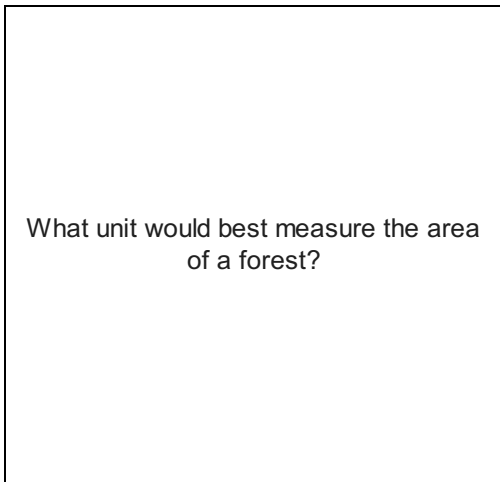
Date: _____

1.



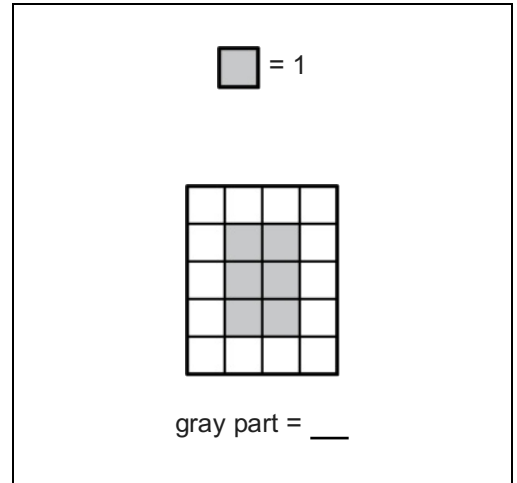
- A. 5
- B. 4
- C. 8

3.




- A. miles²
- B. inches²
- C. centimeters²

2.



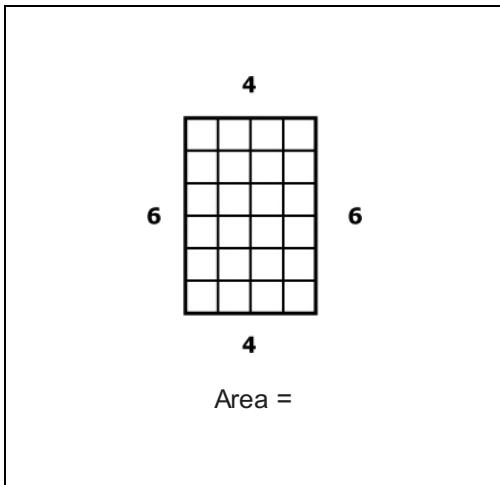
- A. 5
- B. 6
- C. 4

4.



- A.
- B.
- C.

5.



- A. 4×6
- B. $6 - 4$
- C. $4 + 4 + 6 + 6$

6.

Absences

Week	Absences
1	8
2	6
3	5
4	4

How many absences in Week 3?

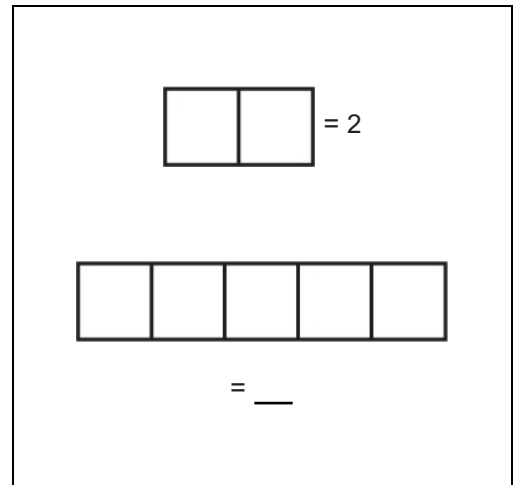
- A. 8
- B. 6
- C. 5

7.

What unit would best measure the area of a bathroom?

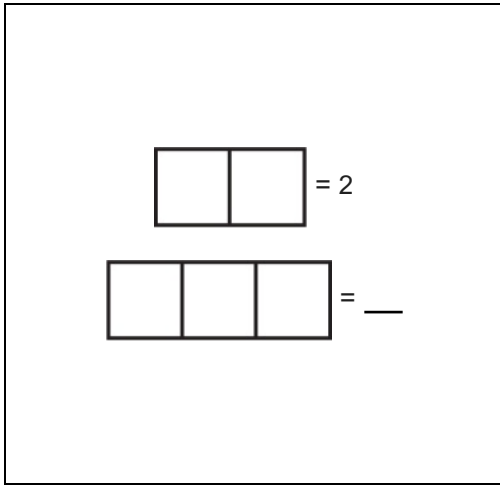
- A. miles²
- B. inches²
- C. feet²

8.



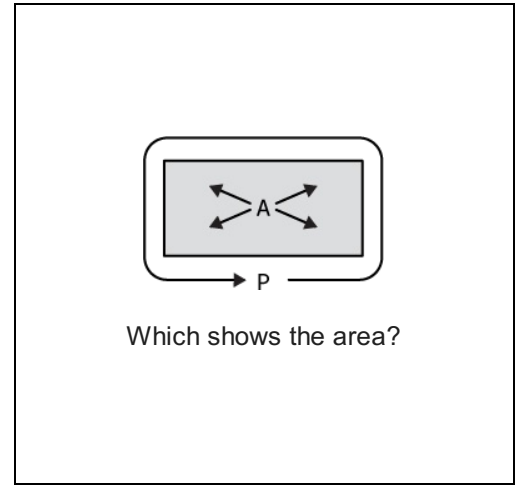
- A. 4
- B. 3
- C. 5

9.



- A. 2
- B. 3
- C. 4

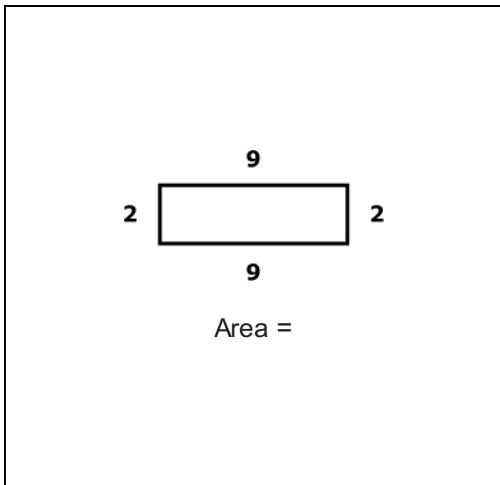
10.



Which shows the area?

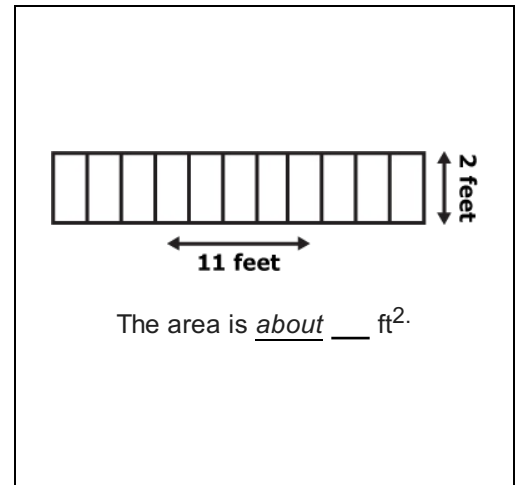
- A. A & P
- B. A
- C. P

11.



- A. $2 + 9$
- B. 29
- C. 2×9

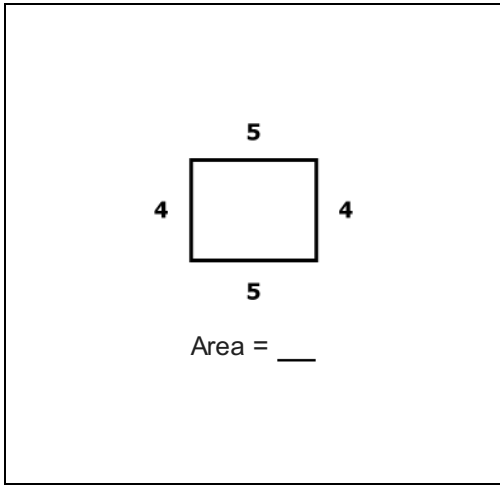
12.



The area is about ___ ft^2 .

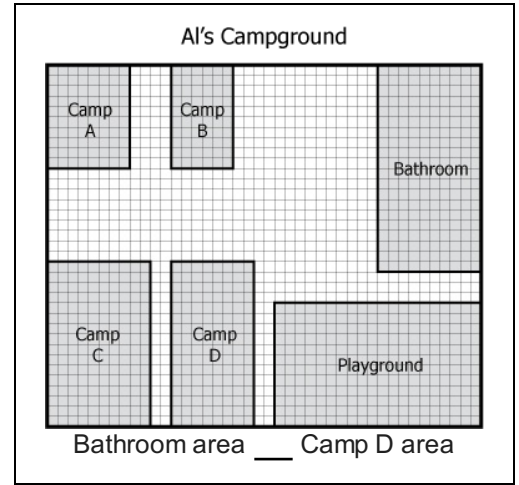
- A. 40
- B. 20
- C. 30

13.



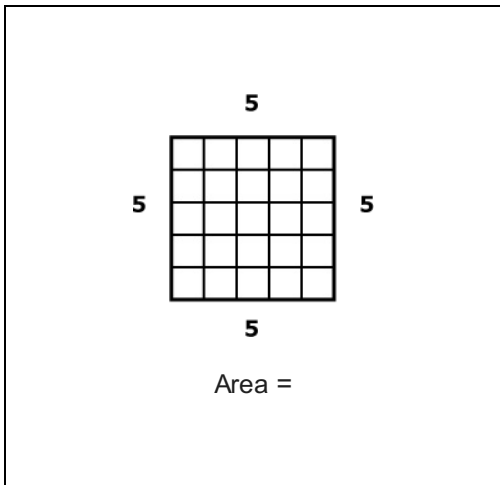
- A. $4 + 5$
- B. 45
- C. 4×5

14.



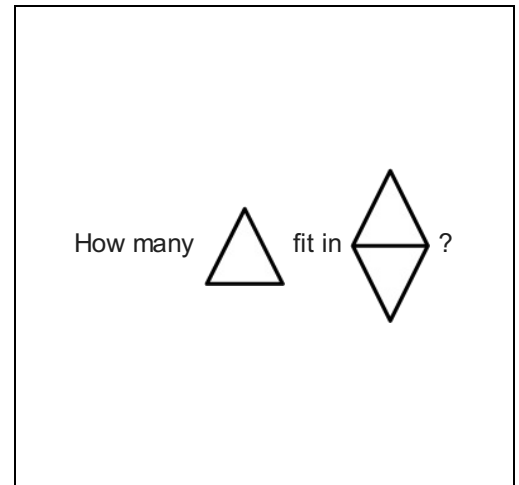
- A. $<$
- B. $=$
- C. $>$

15.



- A. 5×5
- B. $5 + 5 + 5 + 5$
- C. $5 - 5$

16.



- A. 2
- B. 1
- C. 3