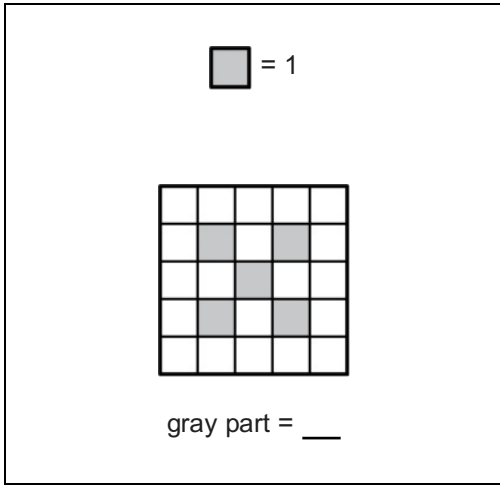


Math Measurement 4_2

Student Name: _____

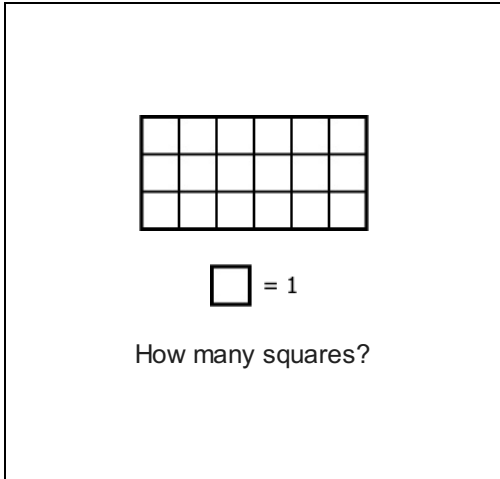
Date: _____

1.




- A. 3
- B. 6
- C. 5

3.



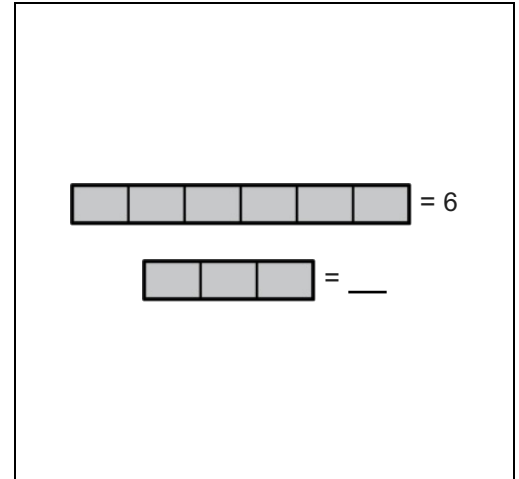
- A. 18
- B. 6
- C. 3

2.



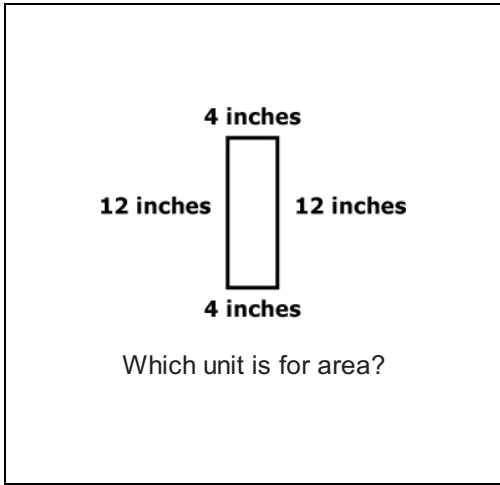
- A. apples
- B. bananas
- C. grapes

4.



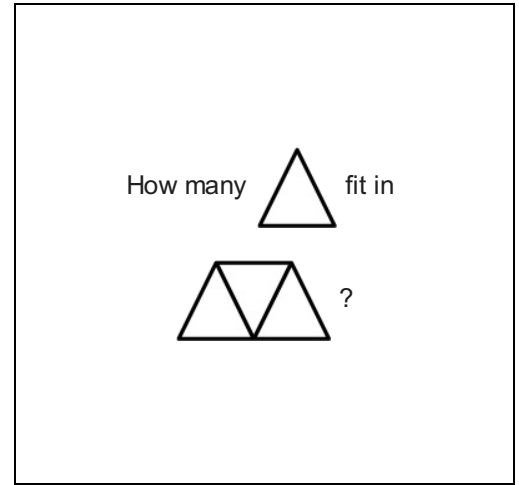
- A. 2
- B. 3
- C. 4

5.



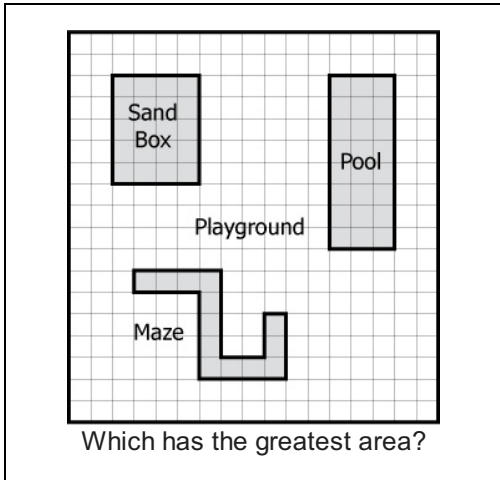
- A. inches²
- B. inches
- C. inches³

6.



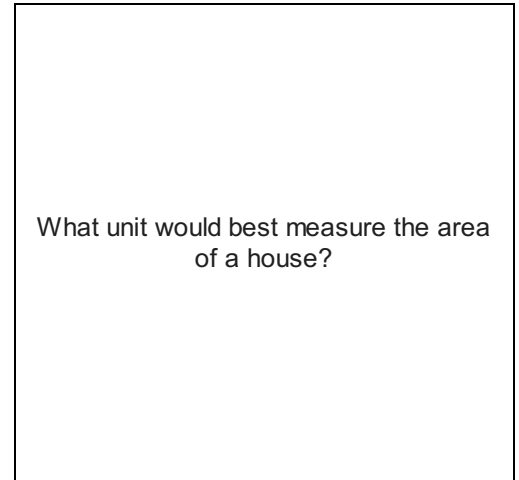
- A. 4
- B. 5
- C. 3

7.



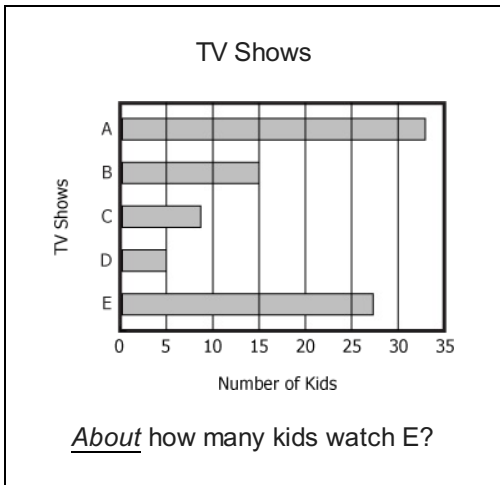
- A. Maze
- B. Pool
- C. Sandbox

8.



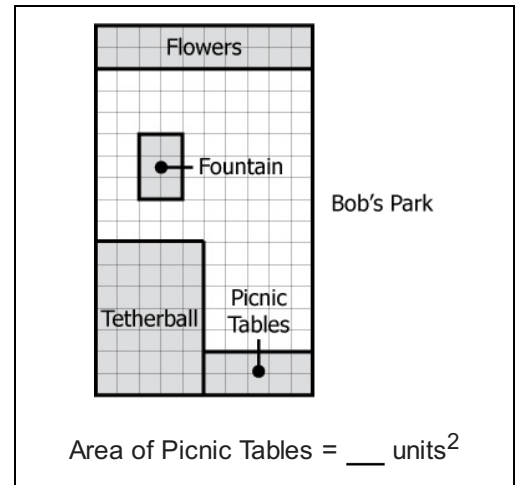
- A. miles²
- B. feet²
- C. inches²

9.



- A. 33
- B. 27
- C. 25

10.



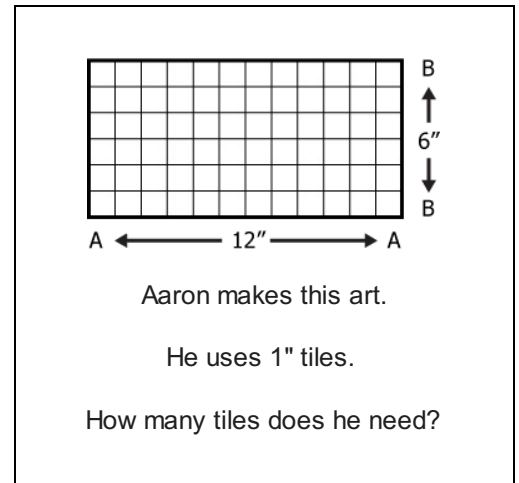
- A. 25
- B. 10
- C. 7

11.

The amount of space in a square = ___

- A. area
- B. width
- C. length

12.



- A. 36
- B. 72
- C. 144

13.



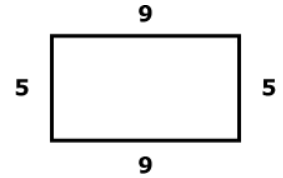
The area of a penny is about 3 cm^2 .

12 pennies fit on a paper.

About how big is the paper?

- A. 15 cm^2
- B. 36 cm^2
- C. 4 cm^2

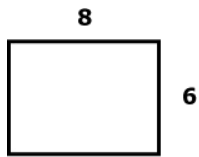
14.



Area =

- A. 59
- B. 5×9
- C. $5 + 9$

15.



Area = ___ units^2

- A. 8
- B. $8 + 8 + 6 + 6$
- C. 8×6

16.

Favorite Fruit	
 apples	
 bananas	
 grapes	

Which is least favorite?

- A. grapes
- B. apples
- C. bananas