


Math Numbers Operations and Algebra 3_1

Student Name: _____

Date: _____

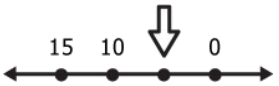
1.



3 kids share these balls evenly.
How many balls does each one get?

- A. 2
- B. 3
- C. 1


2.



Which is here?

- A. 7
- B. 5
- C. 1

3.



Which shows how many circles?

- A. $4 - 4$
- B. 4×4
- C. $4 + 4$

4.

$40 \div 5 = 8$
 $5 \times 8 = \underline{\quad}$

- A. 8
- B. 40
- C. 5

5.

$$46 \times (3 + 7) =$$

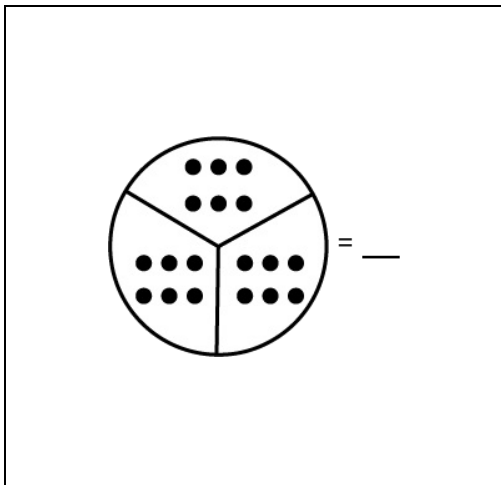
- A. $(46 + 3) \times (46 + 7)$
- B. $(3 \times 7) + (46 \times 7)$
- C. $(46 \times 3) + (46 \times 7)$

6.

$$362 \times 1 = \underline{\quad}$$

- A. 362
- B. 361
- C. 363

7.



- A. $3\frac{6}{18}$
- B. $3\frac{5}{15}$
- C. $3\frac{3}{9}$

8.

$$122 \times 0 = \underline{\quad}$$

- A. 122
- B. 1220
- C. 0

9.

$6 \times 2 = 12$
Which is true?

- A. $12 - 6 = 2$
- B. $12 \times 6 = 2$
- C. $6 \overline{)12}^2$

10.

$0 \times 91 = \underline{\quad}$

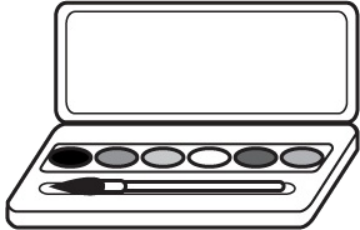
- A. 91
- B. 910
- C. 0

11.

$(4 + 3) \times 2 =$

- A. 7×2
- B. $3 + 8$
- C. 4×6

12.



Sue uses each of these colors 4 times.
Which shows this?

- A. 6×4
- B. $6 + 4$
- C. $6 \div 4$

13.

$3 \times 5 = 15$
Which is true?

- A. $15 - 3 = 5$
- B. $3 \times 15 = 5$
- C. $3 \overline{)15}^5$

14.

$(\bullet\bullet) + (\bullet\bullet\bullet) = ?$


- A. $(2 \times 2) + (2 \times 2)$
- B. $(2 \times 2) + (2 \times 3)$
- C. $(2 + 2) \times (2 + 3)$

15.

$8(2 \div 2) = 2(8 \div 2)$
___ = ___

- A. $4 = 4$
- B. $8 = 8$
- C. $6 = 6$

16.


Which shows how many squares?

- A. $4 + 6$
- B. $4 - 6$
- C. 4×6