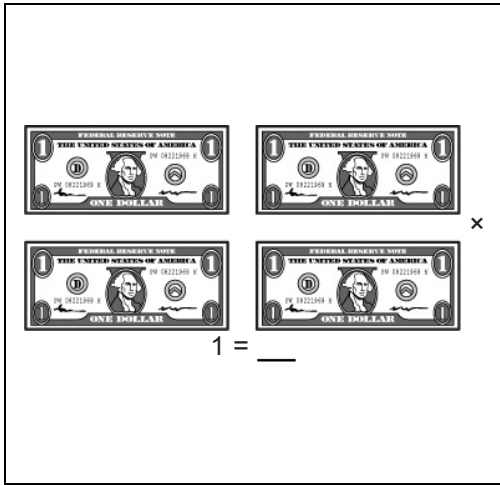


Math Numbers Operations and Algebra 4_1

Student Name: _____

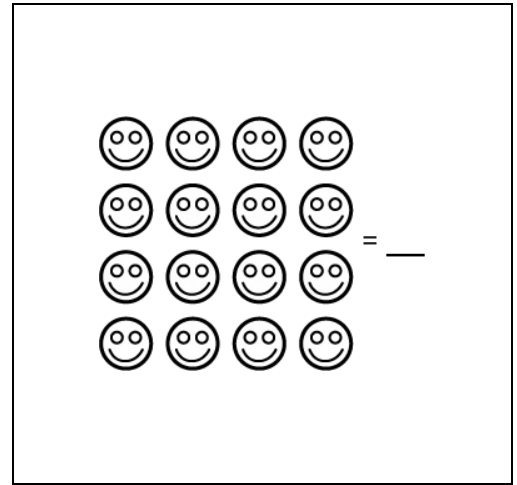
Date: _____

1.



- A. \$4.00
- B. \$0.40
- C. \$5.00

2.



- A. 4×4
- B. 4×5
- C. 4×6

3.

Bess gets 3 pounds of candy.
Each pound costs \$3.07.
About how much does she pay in all?

- A. \$6
- B. \$8
- C. \$9

4.

$$\begin{array}{r} 423 \\ \times \quad 7 \\ \hline \end{array}$$

What do you do first?

- A. 7×42
- B. 7×3
- C. 7×2

5.

There are 4 pitchers.
Each has 1.8 liters of milk.
About how many liters of milk in all?


- A. 5
- B. 6
- C. 8

6.

There are 7 rows.
Each row has 7 pencils.
How many pencils in all?

- A. 49
- B. 14
- C. 77

7.



Movie tickets cost \$1.50.
How much do 3 tickets cost?

- A. \$3.50
- B. \$4.50
- C. \$1.53

8.

94 about equals ____

- A. 20×3
- B. 30×2
- C. 30×3

9.

There are 54 bells divided equally into 9 groups.

How many bells in each group?

- A. 7
- B. 6
- C. 5

10.

$$4 \times 3 = \underline{\quad} \times 4$$

- A. 4
- B. 7
- C. 3

11.

67 is about equal to

- A. 30×3
- B. 60×2
- C. 30×2

12.

79 about equals

- A. 40×2
- B. 60×2
- C. 75×3

13.

There are 24 coins in 3 equal stacks.
How many coins in each stack?

- A. 9
- B. 8
- C. 7

14.

A hand is 4 inches long.
A pony is 7 hands tall.
About how tall is the pony?

- A. 50 inches
- B. 15 inches
- C. 30 inches

15.

Nan paints nails for her friends.
Each friend has 10 finger nails and 10
toe nails.
She has 12 friends.
How many nails does she paint in all?

- A. 240
- B. 220
- C. 400

16.



The box has 6 rows.
Each row has 6 crayons.
How many crayons in all?

- A. 12
- B. 36
- C. 24