


Math Numbers Operations and Algebra 4_5

Student Name: _____

Date: _____

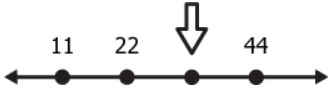
1.



A pack of gum has 12 sticks.
How many sticks in 3 packs?

- A. 36
- B. 18
- C. 15


2.



Which is here?

- A. 35
- B. 33
- C. 40


3.



Jo spins 3 times.
Each time, she gets 8 points.
How many points in all?

- A. 24
- B. 16
- C. 11

4.



Which shows how many?

- A. $4 + 3$
- B. 4×4
- C. 4×3

5.

Keri's foot is about 12".
Her pet lizard is 3.1 times longer.
About how long is the lizard?

- A. 36"
- B. 48"
- C. 15"

6.

6	18
7	21
?	24

? = ___

- A. 5
- B. 8
- C. 4

7.

$$\begin{array}{r} 212 \\ \times 4 \\ \hline \end{array}$$

- A. 848
- B. 828
- C. 888

8.

There are 4 bowls of 8 apples.
How many apples in all?

- A. 12
- B. 44
- C. 32

9.

$$\begin{array}{r} 319 \\ \times 3 \\ \hline \end{array}$$

- A. 957
- B. 937
- C. 322

10.

$$(2 + 4) \times 3 =$$

- A. 6×3
- B. $6 + 3$
- C. 8×3

11.

99 about equals ____

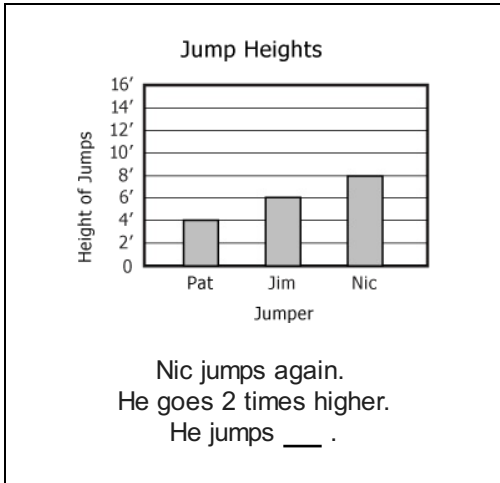
- A. 40×2
- B. 30×3
- C. 50×2

12.

There are 49 pencils in 7 equal groups.
How many pencils in each group?

- A. 7
- B. 8
- C. 6

13.



- A. 18'
- B. 14'
- C. 16'

14.

Two CDs cost \$12.30.
Trina wants 5 CDs.
About how much money does she need?

- A. \$45.00
- B. \$30.00
- C. \$40.00

15.

Jill buys 4 pounds of bananas.
Each pound costs \$0.96.
About how much does she pay in all?

- A. \$4
- B. \$5
- C. \$3

16.

$(10 \times 10) + (3 \times 3) = \underline{\quad}$

- A. 103
- B. 106
- C. 109