

Math Numbers Operations and Algebra 4_8

Student Name: _____


Date: _____

1.

$2 \times 3 = \underline{\quad}$

- A. 8
- B. 6
- C. 5


2.



$\$0.10 \times 5 = \underline{\quad}$

- A. \$0.50
- B. \$0.10
- C. \$0.15


3.



There are 7 rows. Each row has 9 bells.
How many bells in all?

- A. 63
- B. 79
- C. 45

4.



=

- A. 18
- B. 12
- C. 9

5.



A box has 12 oranges in each row.

There are 2 rows.

The school uses 5 boxes.

How many oranges did they use?

- A. 120
- B. 60
- C. 85

6.

$$(1 + 4) \times 3 =$$

- A. $5 + 3$
- B. $5 - 3$
- C. 5×3

7.

$$\begin{array}{r} 52 \\ \times 6 \\ \hline \end{array}$$

What do you do first?

- A. 6×50
- B. 5×6
- C. 6×2

8.

$$\begin{array}{r} 29 \\ \times 3 \\ \hline \end{array}$$

What do you do first?

- A. 3×9
- B. 3×20
- C. 3×2

9.

$$(6 \times 10) + (3 \times 3) = \underline{\quad}$$

- A. 64
- B. 66
- C. 69

10.

$$\begin{array}{r} 41 \\ \times 8 \\ \hline \end{array}$$

What do you do first?

- A. 8×1
- B. 8×40
- C. 4×8

11.

$$\begin{array}{r} 237 \\ \times 10 \\ \hline \end{array}$$

- A. 247
- B. 2370
- C. 2607

12.

There are 4 bags.
Each bag has 2.1 pounds of flour.


About how much flour in all?

- A. 7 pounds
- B. 9 pounds
- C. 8 pounds

13.

2 inches

2 inches

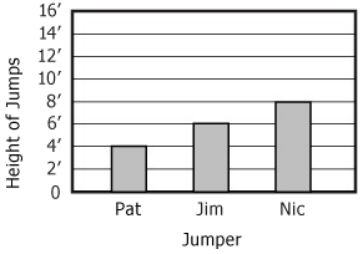


Area = ___ in²

- A. 8
- B. 6
- C. 4

14.

Jump Heights



Jumper	Height of Jumps
Pat	4'
Jim	6'
Nic	8'

Pat jumps 3 times higher on his next jump.
How many feet does he jump?

- A. 16'
- B. 12'
- C. 8'

15.

There are 3 cups.

Each cup has 1.8 liters of milk.

About how much milk is there in all?

- A. 6 liters
- B. 8 liters
- C. 4 liters

16.

Each ice cream costs \$2.07.

About how much would 4 ice creams cost?

- A. \$12
- B. \$8
- C. \$10