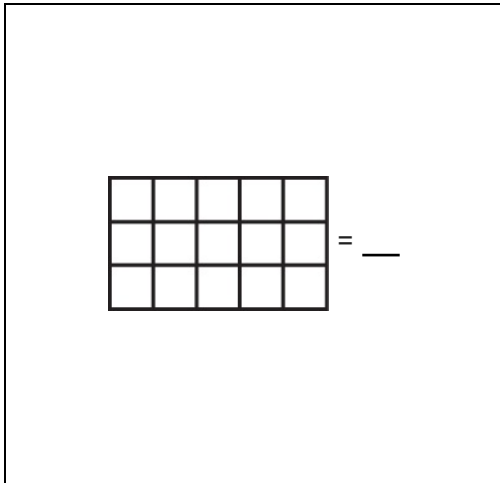


## Math Numbers Operations and Algebra 5\_2

Student Name: \_\_\_\_\_

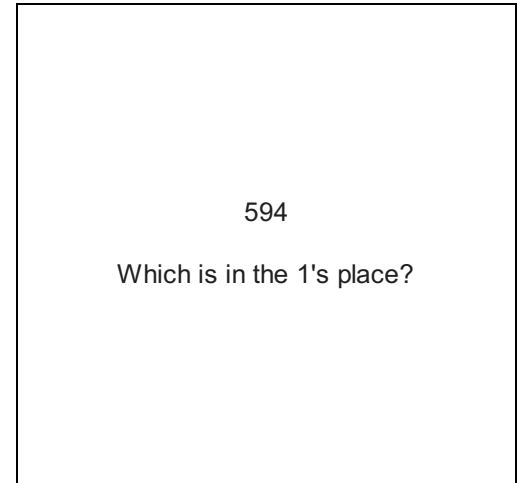
Date: \_\_\_\_\_

1.



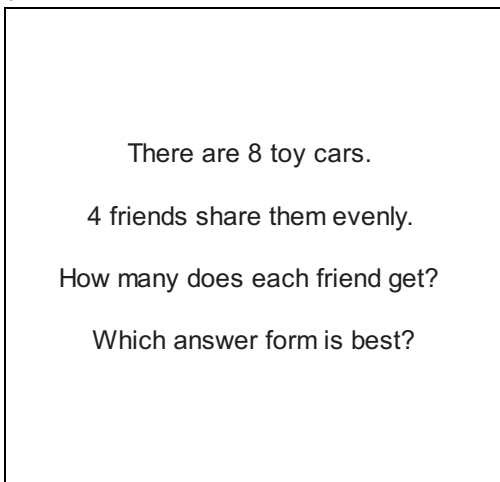
- A.  $3 \times 4$
- B.  $3 \times 5$
- C.  $3 \times 3$

2.



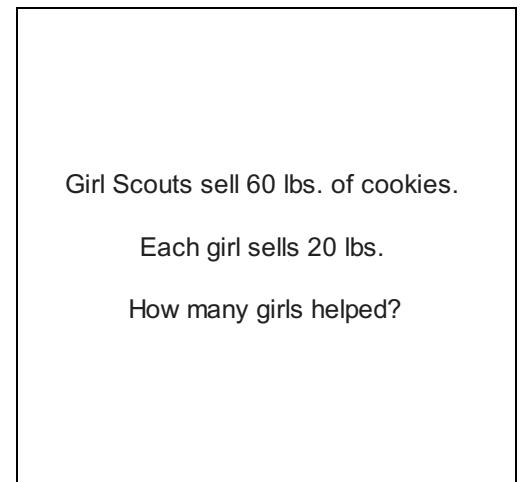
- A. 4
- B. 9
- C. 5

3.



- A. 2 friends
- B. 2 answers
- C. 2 toy cars

4.



- A.  $20 + 20$
- B.  $20 \times 20$
- C.  $60 \div 20$

5.

$28 \div 3$  is about \_\_\_\_

- A.  $20 \times 3$
- B.  $20 \div 3$
- C.  $30 \div 3$

6.

Jon gets 1 page of work each day.

How many pages does he get in 20 days?

- A.  $1 + 20$
- B.  $1 \times 20$
- C.  $20 + 20$

7.

$24 \div 2 =$  \_\_\_\_

- A. 14
- B. 12
- C. 24

8.

Rosa makes 60 baskets in 6 minutes.

How many baskets can she make in 1 minute?

- A.  $60 \overline{)6}$
- B.  $6 \overline{)60}$
- C.  $2 \overline{)60}$

9.

Betty buys 10.2 pounds of peanuts for \$20.

About how much do the peanuts cost per pound?

- A. \$3
- B. \$2
- C. \$4

10.

$$5 \overline{)95}$$

- A. 19
- B. 17
- C. 21

11.

$$4 \overline{)624}$$

What do you do first?

- A.  $6 \div 4$
- B.  $62 \div 4$
- C.  $4 \div 4$

12.

Bill buys 4.8 pounds of oranges for \$10.

About how much do they cost per pound?

- A. \$8
- B. \$2
- C. \$4

13.

8 pounds of silver cost \$40.00.

How much is one pound?

Which answer form is best?

- A. 5 answers
- B. \$5.00
- C. 5 pounds

14.

$$3 \overline{)295}$$

- A. 96 R2
- B. 98 R1
- C. 98 R2

15.

$$23 \overline{)690}$$

- A. 30
- B. 69
- C. 46

16.

4 pounds of rice cost \$12.00.

How much is 1 pound?

Which answer form is best?

- A. 3 pounds
- B. 3 answers
- C. \$3.00