

Math Numbers Operations and Algebra 5_8

Student Name: _____

Date: _____

1.

631
The 6 = ____


- A. 3
- B. 600
- C. 60

2.

$5 \times 2 =$


- A. $2 + 5 + 5$
- B. $5 \div 2$
- C. 2×5

3.

quarter  = \$0.25
Ann has \$1.50 in quarters.
How many quarters does she have?

- A. 7
- B. 8
- C. 6

4.


There are 56 dots in 7 rows.
How many dots in each row?

- A. $56 - 7$
- B. $56 \div 7$
- C. $7 + 56$

5.

5 buckets hold 16 gallons in all.
About how much does each bucket hold?

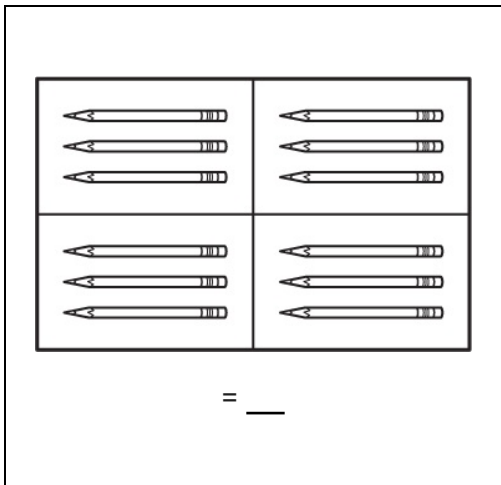
- A. 4 gallons
- B. 3 gallons
- C. 5 gallons

6.

Don reads 2 books in 8 days.
How many days to read 1 book?


- A. $2 + 8$
- B. 2×8
- C. $2 \overline{)8}$

7.



- A. $3 + 4$
- B. $12 \div 4$
- C. $7 \div 3$

8.



- A. \$5.00
- B. \$6.00
- C. \$4.00

9.

$$100 \div 4 = \underline{\quad}$$

- A. 10
- B. 25
- C. 30

10.

Bo spends \$40.00 in 10 days.

He spends the same each day.

How much does he spend each day?

- A. $40 \overline{)100}$
- B. 10×10
- C. $10 \overline{)40}$

11.

$$6 \overline{)429}$$

What do you do first?

- A. $42 \div 6$
- B. $4 \div 6$
- C. $29 \div 6$

12.

Josh buys 6.2 pounds of marbles for \$18.

About how much do the marbles cost per pound?

- A. \$5
- B. \$4
- C. \$3

13.

3 cups hold 15.3 oz. in all.
About how much does each cup hold?

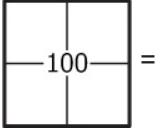
- A. 12 oz.
- B. 16 oz.
- C. 5 oz.

14.

Joe hits 50 balls in 10 minutes.
How many balls can he hit in 1 minute?

- A. $10 \overline{)50}$
- B. $50 \overline{)10}$
- C. $1 \overline{)50}$

15.



- A. $4 \overline{)400}$
- B. $200 \div 100$
- C. $100 \div 4$

16.

A pizza has 8 pieces.
4 friends share it evenly.
How many pieces does each one get?

- A. 3
- B. 4
- C. 2