

# Math Numbers and Operations 1\_1

Student Name: \_\_\_\_\_

Date: \_\_\_\_\_

1.

55, 56, 57, 58, \_\_, \_\_, \_\_

What comes next?

- A. 50, 51, 52
- B. 59, 60, 61
- C. 60, 61, 62

2.

99, 98, 97, \_\_, 95

What number is missing?

- A. 95
- B. 96
- C. 90

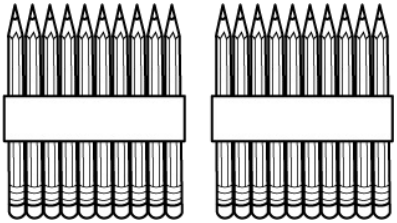
3.

18		20
----	--	----

What number is missing?

- A. 19
- B. 21
- C. 17

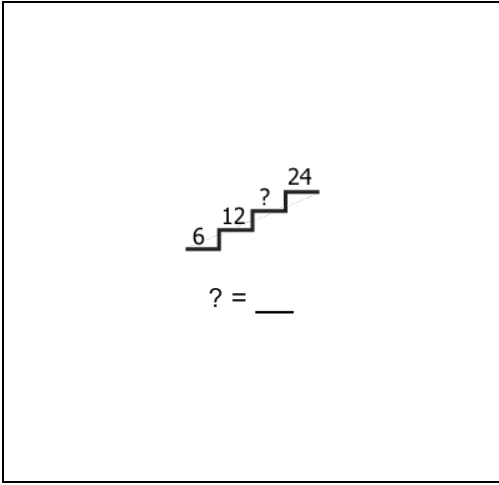
4.



How many?

- A. 10
- B. 2
- C. 20

5.



- A. 16
- B. 18
- C. 24

6.

15, 7, 13, 10, 20

Which numbers are less than 12?

- A. 7, 10
- B. 15, 7
- C. 20, 10

7.

Ten plus one is \_\_\_.

- A. 12
- B. 9
- C. 11

8.

80, 70, 60, 50, \_\_\_

What number goes here?

- A. 40
- B. 30
- C. 10

9.

0 1 2 3 4 5 6 7 8 9 10 11 12 13 14 15

What number is missing?

0		10	15
---	--	----	----

- A. 4
- B. 5
- C. 6

10.

12, 14, 16, \_\_, \_\_, \_\_, 24

What numbers are missing?

- A. 15, 16, 17
- B. 18, 20, 22
- C. 25, 26, 27

11.

5 6 7 8 9 10 11 12 13 14 15 16 17 18 19 20

Which number is closest to 17?

- A. 15
- B. 18
- C. 13

12.

12, 6, 3, 11, 9

Which numbers are greater than 10?

- A. 9, 11
- B. 3, 6
- C. 12, 11

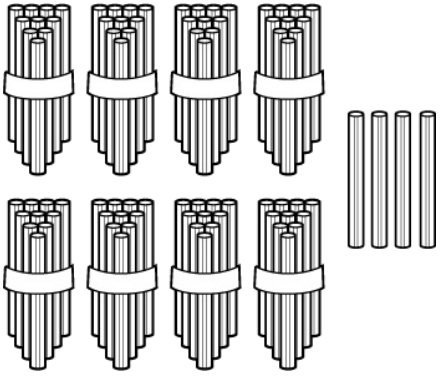
13.

20, 40, 60, \_\_, 100

What number goes here?

- A. 90
- B. 80
- C. 50

14.



How many straws are there?

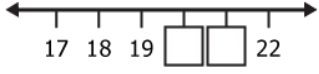
- A. 4 tens and 8 ones
- B. 8 tens and 4 ones
- C. 8 tens and 5 ones

15.

8, 16, 24, \_\_

- A. 40
- B. 32
- C. 50

16.



Pick the missing numbers.

- A. 23 and 24
- B. 20 and 21
- C. 19 and 20