

# Math Numbers and Operations 1\_3

Student Name: \_\_\_\_\_

Date: \_\_\_\_\_

1.

38, 39, \_\_, 41

What number is missing?

- A. 40
- B. 39
- C. 50

2.

□ ○ △ ☆ □ \_ △ ☆

What goes here?

- A. ☆
- B. △
- C. ○



3.

46, 45, 44, \_\_, \_\_, \_\_, 40

What numbers are missing?

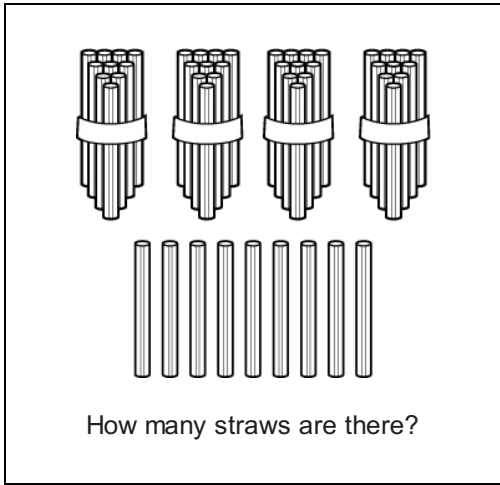
- A. 40, 39, 38
- B. 39, 38, 37
- C. 43, 42, 41

4.

 +  =

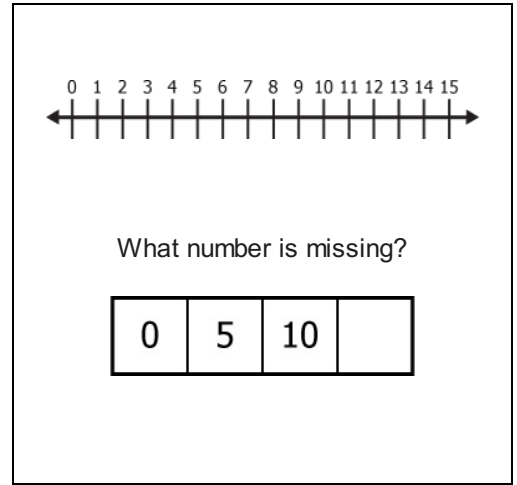
- A. 9 bananas
- B. 10 bananas
- C. 7 bananas

5.



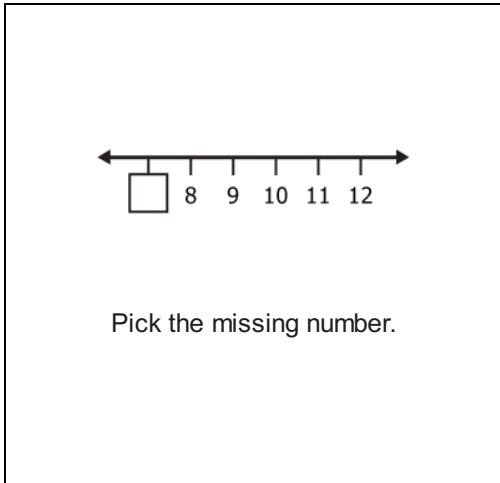
- A. 4 tens and 10 ones
- B. 4 tens and 9 ones
- C. 9 tens and 4 ones

6.



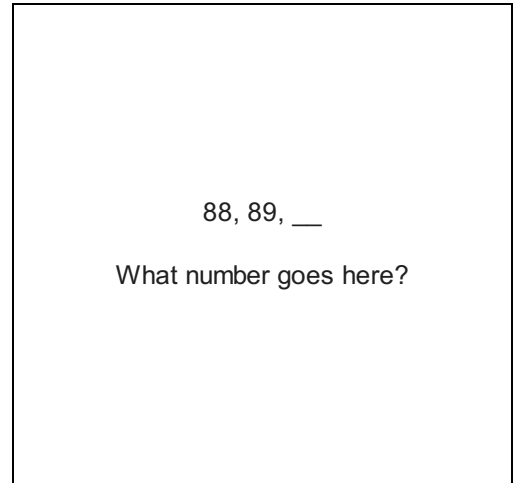
- A. 16
- B. 14
- C. 15

7.



- A. 5
- B. 7
- C. 6

8.



- A. 87
- B. 91
- C. 90

9.

|  |   |   |
|--|---|---|
|  | 2 | 3 |
|--|---|---|

What number is missing?

- A. 5
- B. 4
- C. 1

10.

2, 4, 6, \_\_\_

- A. 10
- B. 8
- C. 7

11.

What number comes before 18?

- A. 17
- B. 19
- C. 20

12.

|  |    |    |
|--|----|----|
|  | 70 | 71 |
|--|----|----|

What number is missing?

- A. 72
- B. 68
- C. 69

13.

What number comes before 99?

- A. 98
- B. 100
- C. 109

14.

253, 353, 153, 453  
Put these numbers in order from greatest to least.

- A. 453, 252, 353, 153
- B. 353, 453, 253, 153
- C. 453, 353, 253, 153

15.

86, 68, 80  
Which number has the greatest value?

- A. 86
- B. 68
- C. 80

16.

22, 23, \_\_, 25, \_\_, 27  
What numbers are missing?

- A. 20, 26
- B. 24, 26
- C. 22, 21