

Math Numbers and Operations 1_4

Student Name: _____

Date: _____

1.

5, 10, 15, __
What number comes next?

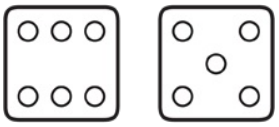
- A. 10
- B. 25
- C. 20

2.

22, 23, __
What comes next?

- A. 20
- B. 24
- C. 21

3.



How many?

- A. 11
- B. 10
- C. 8

4.

19	20	
----	----	--

What number is missing?

- A. 17
- B. 22
- C. 21

5.

15, 18, 21, ___

- A. 23
- B. 24
- C. 14

6.

=

- A. 6
- B. 5
- C. 8

7.

What number does this show?

- A. 45
- B. 29
- C. 37

8.

Start at 15. Count back 3.
Where are you now?

- A. 12
- B. 10
- C. 3

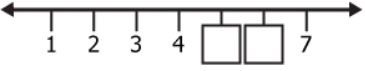
9.

5, 1, 9, 0, 3

Which numbers are greater than 3?

- A. 1, 0
- B. 3, 9
- C. 5, 9

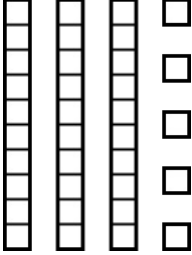
10.



Pick the missing numbers.

- A. 5 and 6
- B. 4 and 5
- C. 6 and 7

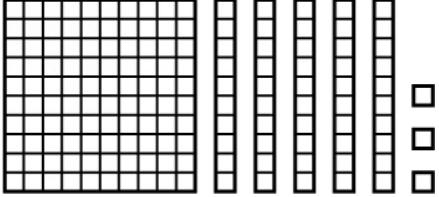
11.



How many blocks?

- A. 35
- B. 33
- C. 53

12.



What number does this show?

- A. 153
- B. 143
- C. 150

13.

35, 40, 45, ___
What number comes next?

- A. 40
- B. 50
- C. 46

14.

Which is here?

- A. 7
- B. 5
- C. 1

15.

18 ___ 21

- A. <
- B. >
- C. =

16.

□○△△□○_△□
What goes here?

- A. △
- B. □
- C. ○