

## Math Numbers and Operations 1\_5

Student Name: \_\_\_\_\_

Date: \_\_\_\_\_

1.

13, 14, \_\_  
What comes next?

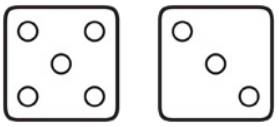
- A. 15
- B. 10
- C. 13

2.

38, \_\_, 40  
What number is missing?

- A. 39
- B. 37
- C. 41

3.



How many?

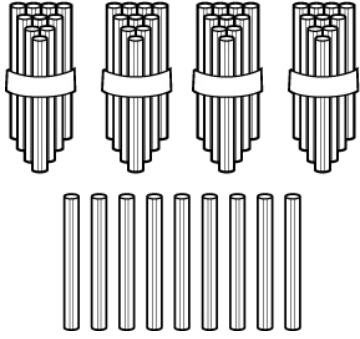
- A. 8
- B. 10
- C. 12

4.

38, 39, \_\_  
What comes next?

- A. 38
- B. 30
- C. 40

5.



How many straws are there?

- A. 4 tens and 10 ones
- B. 4 tens and 9 ones
- C. 9 tens and 4 ones

6.

\_\_\_, 30, 31

What comes before?

- A. 29
- B. 35
- C. 31

7.

476

What number is in the tens place?

- A. 6
- B. 4
- C. 7

8.

11, 12, 9

Which number has the least value?

- A. 9
- B. 12
- C. 11

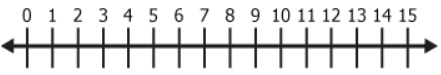
9.

22, 21, 20, \_\_\_

What number comes next?

- A. 18
- B. 15
- C. 19

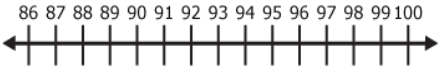
10.



Which number is closest to 12?

- A. 10
- B. 15
- C. 13

11.



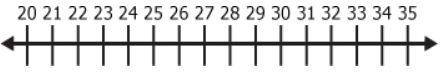
Start at 90.

Move forward 9.

What's the number?

- A. 100
- B. 98
- C. 99

12.



Start at 21.

Move forward 3.

What's the number?

- A. 25
- B. 23
- C. 24

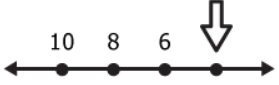
13.

79, 80, 90

Which number has the least value?

- A. 79
- B. 90
- C. 80

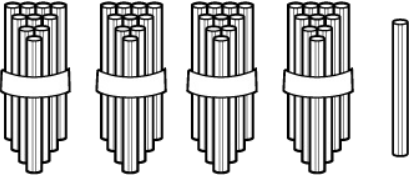
14.



Which is here?

- A. 5
- B. 4
- C. 7

15.



What number is this?

- A. 44
- B. 41
- C. 14

16.

34	35	
----	----	--

What number is missing?

- A. 33
- B. 37
- C. 36