

Math Numbers and Operations 1_6

Student Name: _____

Date: _____

1.

33, __, 35
What number goes here?

- A. 33
- B. 34
- C. 35

2.

What number is one more than 10?

- A. 9
- B. 11
- C. 12

3.

__, 11, 12
What comes before?

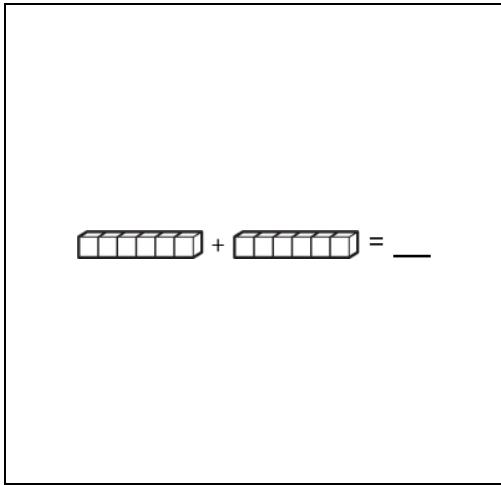
- A. 15
- B. 12
- C. 10

4.

$\boxed{98} =$

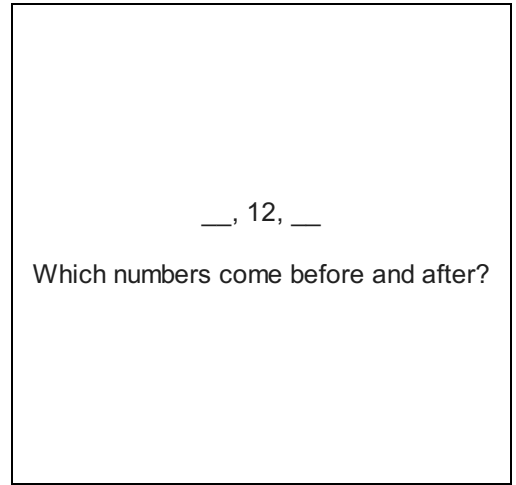
- A. 9 tens and 9 ones
- B. 8 tens and 9 ones
- C. 9 tens and 8 ones

5.



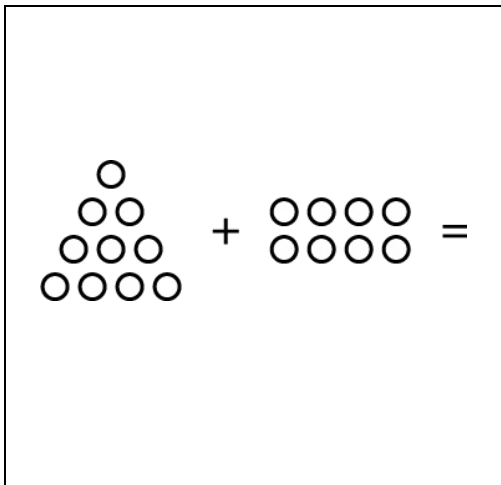
- A.
- B.
- C.

6.



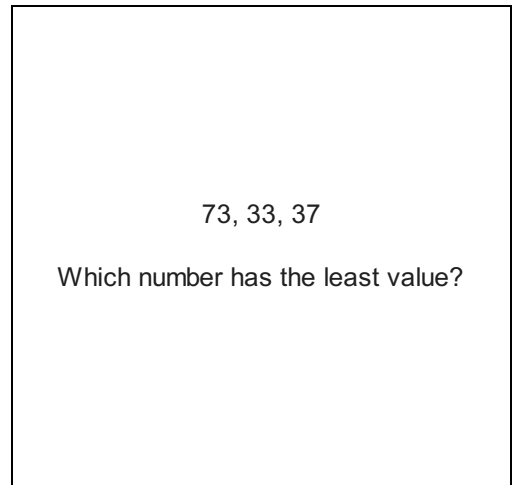
- A. 15, 10
- B. 7, 11
- C. 11, 13

7.



- A. 18
- B. 15
- C. 19

8.



- A. 33
- B. 73
- C. 37

9.

57, 58, 59, __, __, __, 63

What numbers are missing?

- A. 65, 66, 67
- B. 60, 61, 62
- C. 55, 56, 57

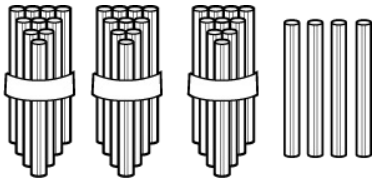
10.

20, 15, 10, 19, 11

Which numbers are greater than 18?

- A. 20, 11
- B. 19, 20
- C. 15, 10

11.



How many straws are there?

- A. 4 tens and 3 ones
- B. 3 tens and 4 ones
- C. 3 tens and 3 ones

12.

$$\begin{array}{r} 46 \\ + 42 \\ \hline \end{array}$$

- A. 56
- B. 98
- C. 88

13.

What number comes before 30?

- A. 31
- B. 29
- C. 35

14.

19 =

- A. 9 tens and 1 one
- B. 1 ten and 9 ones
- C. 1 ten and 10 ones

15.

1, 10, 5, 8, 3
Which numbers are greater than 5?

- A. 8, 3
- B. 1, 10
- C. 10, 8

16.

9	10	
---	----	--

What number is missing?

- A. 12
- B. 8
- C. 11