

Math Numbers and Operations 1_7

Student Name: _____

Date: _____

1.

38, 39, __, 41
What number is missing?

- A. 40
- B. 39
- C. 50

2.

Ten plus six is __.

- A. 16
- B. 9
- C. 17

3.

69, 70, 71, __, __, __, 75
What numbers are missing?

- A. 76, 77, 78
- B. 72, 73, 74
- C. 60, 61, 62

4.

	91	92
--	----	----

What number is missing?

- A. 89
- B. 90
- C. 88

5.

40, 37, 41

Which number has the least value?

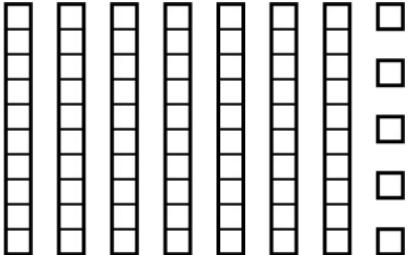
- A. 37
- B. 40
- C. 41

6.

What number comes after 12?

- A. 10
- B. 13
- C. 11

7.



What number does this show?

- A. 70
- B. 65
- C. 75

8.

What number comes after 39?

- A. 38
- B. 35
- C. 40

9.

$$\begin{array}{r} 10 \\ - 5 \\ \hline \end{array}$$

- A. 5
- B. 4
- C. 6

10.

7 tens + 7 ones =

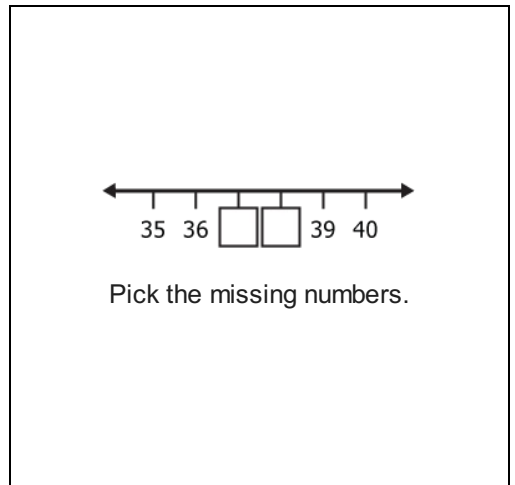
- A. 67
- B. 76
- C. 77

11.

55, 60, 65, __, 75
What number goes here?


- A. 60
- B. 70
- C. 80

12.



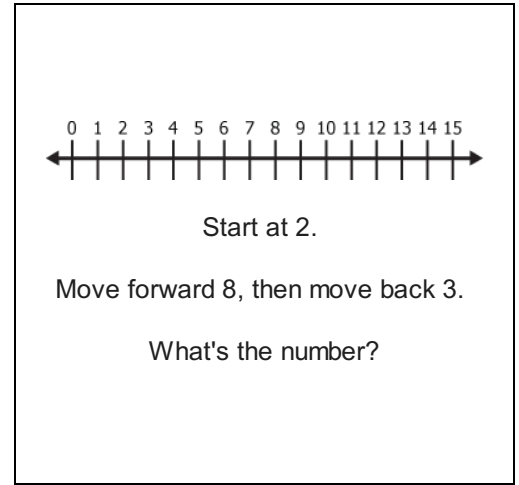
- A. 38 and 39
- B. 36 and 37
- C. 37 and 38

13.



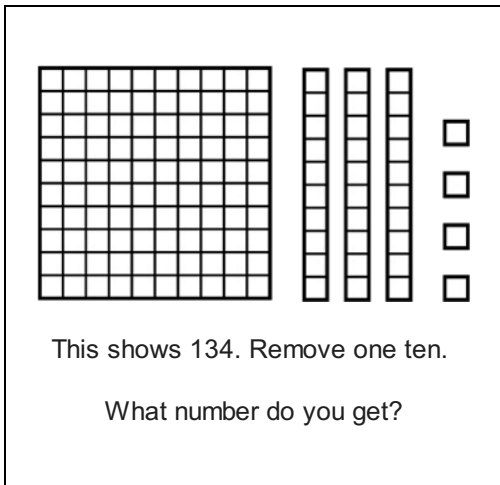
- A. 32
- B. 22
- C. 23

14.



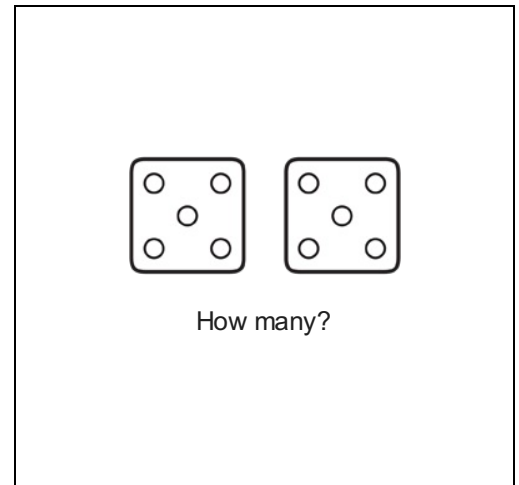
- A. 8
- B. 6
- C. 7

15.



- A. 130
- B. 124
- C. 120

16.



- A. 12
- B. 10
- C. 11