

## Math Numbers and Operations 1\_8

Student Name: \_\_\_\_\_

Date: \_\_\_\_\_

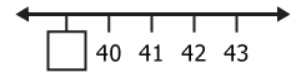
1.

5, 10, 15, \_\_\_

What number comes next?

- A. 10
- B. 25
- C. 20

2.



Pick the missing number.

- A. 38
- B. 44
- C. 39

3.

98	99	
----	----	--

What number is missing?

- A. 100
- B. 97
- C. 101

4.

\_\_\_, 20, \_\_\_

Which numbers come before and after?

- A. 19, 21
- B. 18, 17
- C. 22, 24

5.

728

What number is in the hundreds place?

- A. 8
- B. 7
- C. 2

6.

\_\_, 15, 16

What comes before?

- A. 14
- B. 16
- C. 20

7.

10, 20, 30, \_\_, \_\_, \_\_, 70

What numbers are missing?

- A. 31, 32, 33
- B. 40, 50, 60
- C. 35, 40, 45

8.

54		56
----	--	----

What number is missing?

- A. 55
- B. 67
- C. 53

9.

3, 9, 10, 15

Which number is closest to 12?

- A. 10
- B. 9
- C. 15

10.

$10 + 10 =$

- A. 20
- B. 19
- C. 25

11.

69		71
----	--	----

What number is missing?

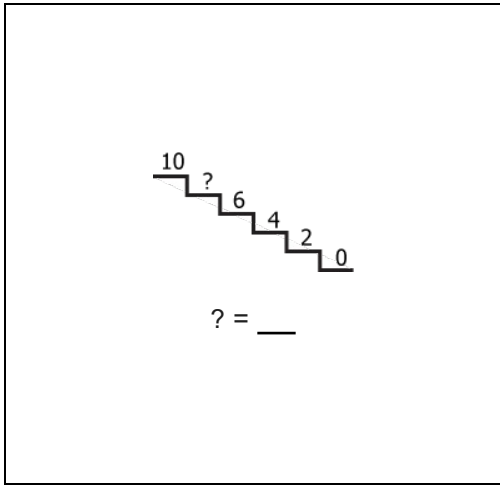
- A. 68
- B. 70
- C. 72

12.

$$\begin{array}{r} 35 \\ + 23 \\ \hline \end{array}$$

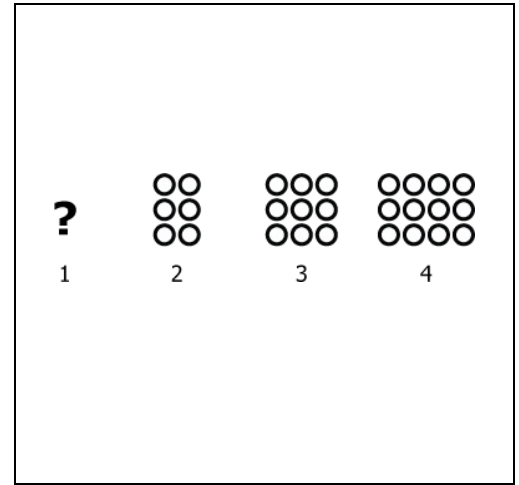
- A. 88
- B. 58
- C. 85

13.



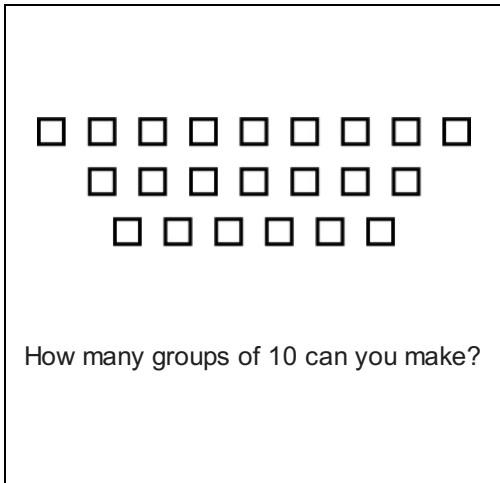
- A. 9
- B. 12
- C. 8

14.



- A. ○  
○  
○
- B. ○  
○
- C. ○○

15.



- A. 2
- B. 1
- C. 3

16.

Ten plus three is \_\_\_.

- A. 12
- B. 13
- C. 11