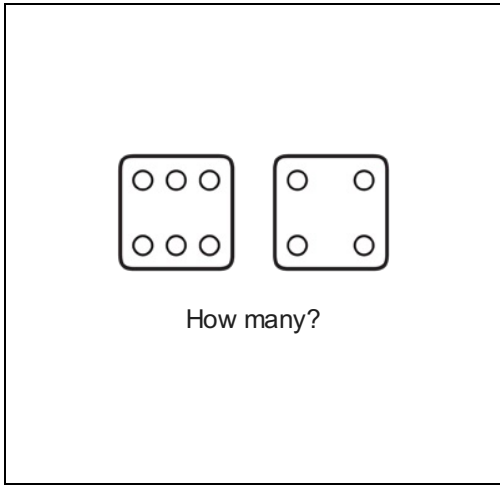


# Math Numbers and Operations 1\_9

Student Name: \_\_\_\_\_

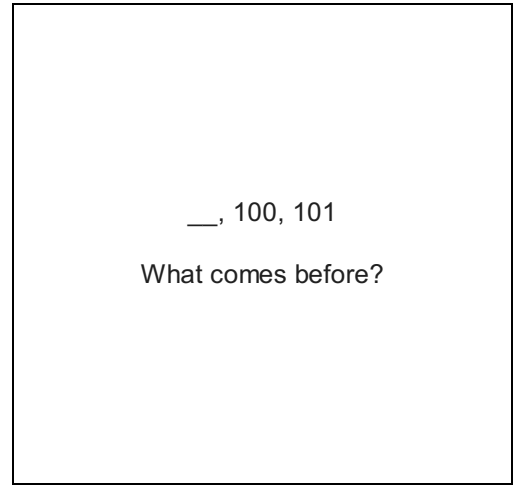
Date: \_\_\_\_\_

1.



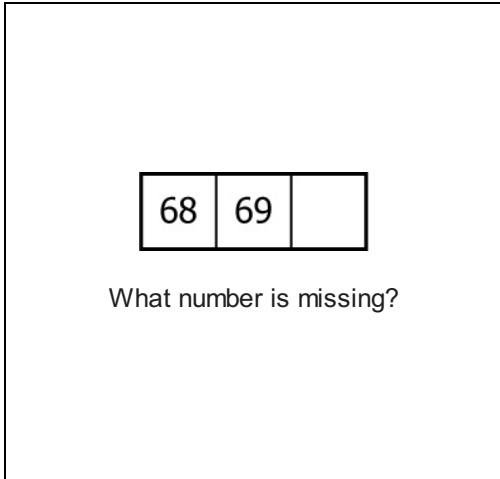
- A. 6
- B. 10
- C. 4

2.



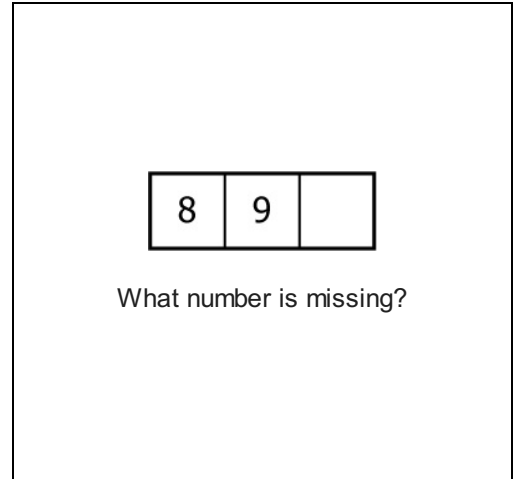
- A. 101
- B. 99
- C. 105

3.



- A. 71
- B. 70
- C. 67

4.



- A. 11
- B. 7
- C. 10

5.

110, 115, 105, 100

Put these numbers in order from least to greatest.

- A. 100, 110, 105, 115
- B. 105, 100, 115, 110
- C. 100, 105, 110, 115

6.

\_\_, 16, \_\_

Which numbers come before and after?

- A. 13, 14
- B. 15, 17
- C. 18, 20

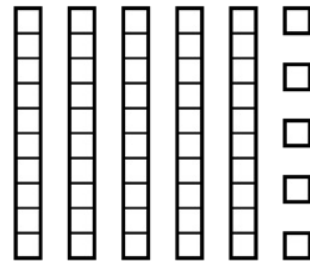
7.

16, 21, 19, 25, 22

Which numbers are less than 20?

- A. 16, 19
- B. 22, 16
- C. 21, 19

8.



What number does this show?

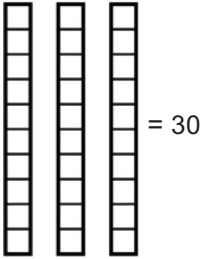
- A. 50
- B. 55
- C. 5

9.

5, 10, 15, 20, \_\_\_

- A. 30
- B. 25
- C. 21

10.



= 30

Remove one ten.

What number do you get?

- A. 30
- B. 10
- C. 20

11.

9, 5, 11, 8, 12

Which numbers are less than 9?

- A. 8, 12
- B. 5, 8
- C. 9, 11

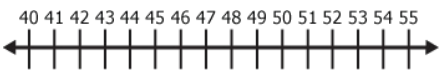
12.

20, 18, 16, \_\_\_

What number goes here?

- A. 12
- B. 14
- C. 10

13.



Start at 52.

Move back 9.

What's the number?


- A. 44
- B. 43
- C. 40

14.

97 \_\_\_ 100

- A. <
- B. >
- C. =

15.



What number is missing?

0		8	12
---	--	---	----

- A. 3
- B. 4
- C. 5

16.

\_\_\_, 6, \_\_\_

Which numbers come before and after?

- A. 8, 9
- B. 5, 7
- C. 3, 4