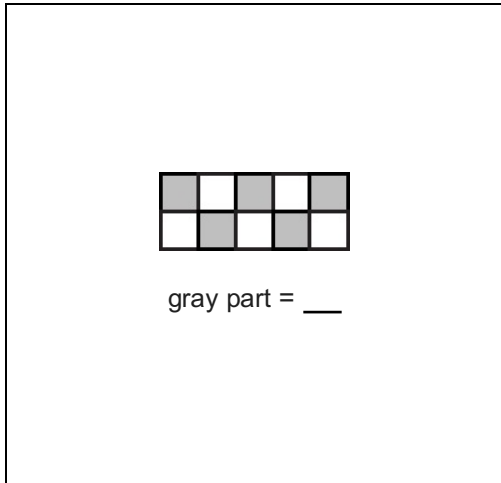


# Math Numbers and Operations 3\_6

Student Name: \_\_\_\_\_

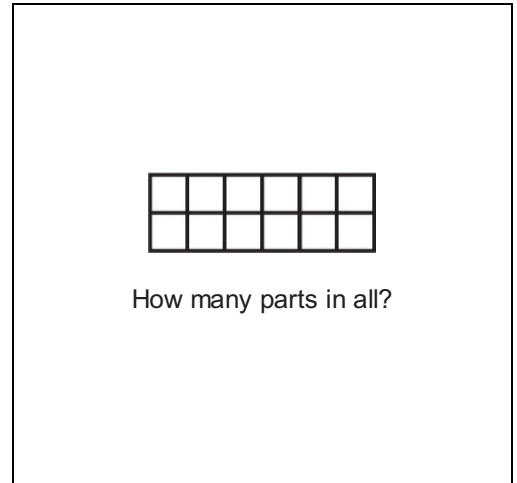
Date: \_\_\_\_\_

1.



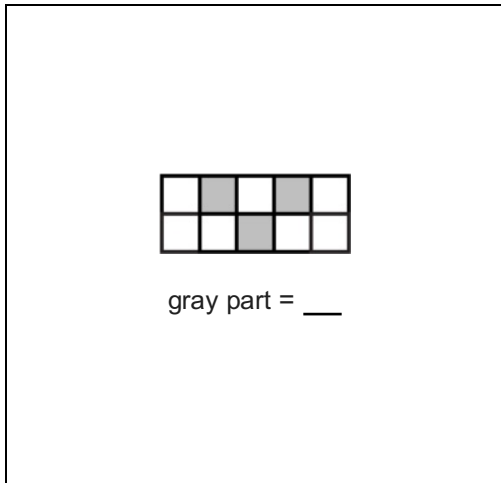
- A.  $\frac{6}{10}$
- B.  $\frac{5}{10}$
- C.  $\frac{4}{10}$

2.



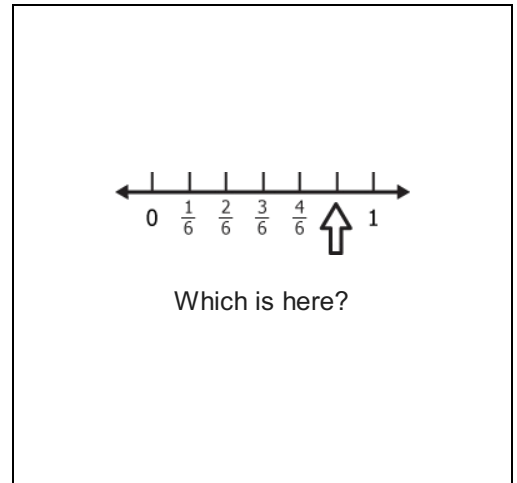
- A. 12
- B. 10
- C. 8

3.



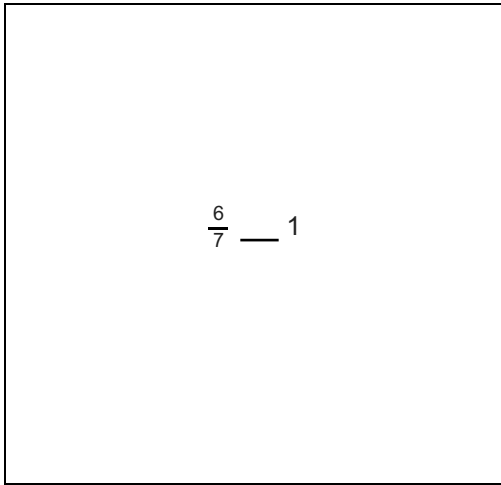
- A.  $\frac{4}{10}$
- B.  $\frac{7}{10}$
- C.  $\frac{3}{10}$

4.



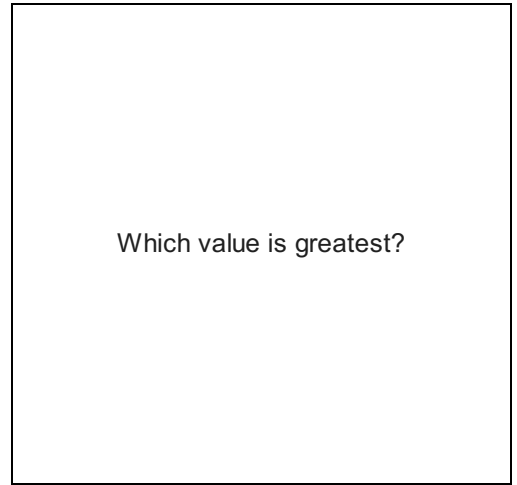
- A.  $\frac{5}{6}$
- B.  $\frac{1}{6}$
- C.  $\frac{4}{6}$

5.



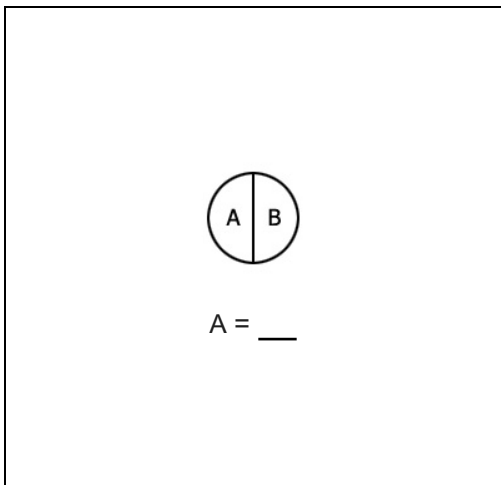
- A. >
- B. =
- C. <

6.



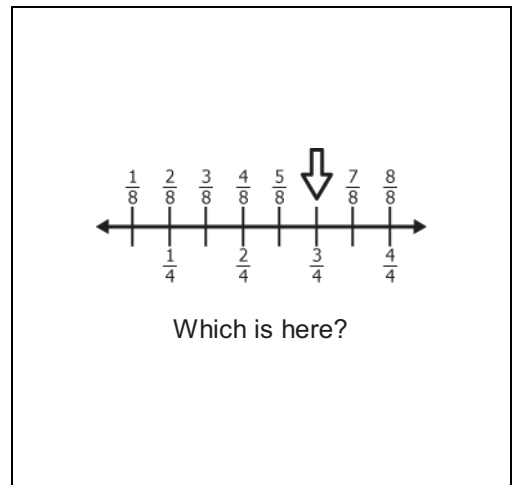
- A.  $\frac{7}{8}$
- B.  $\frac{5}{8}$
- C.  $\frac{6}{8}$

7.



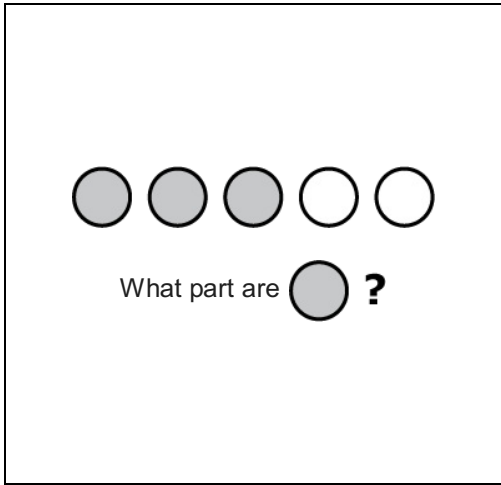
- A.  $\frac{1}{2}$
- B.  $\frac{1}{4}$
- C.  $\frac{1}{3}$

8.




- A.  $\frac{4}{8}$
- B.  $\frac{6}{8}$
- C.  $\frac{5}{5}$

9.



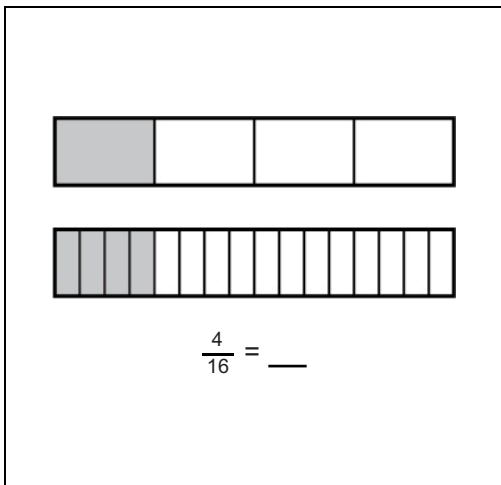
- A.  $\frac{3}{3}$
- B.  $\frac{3}{5}$
- C.  $\frac{5}{3}$

10.



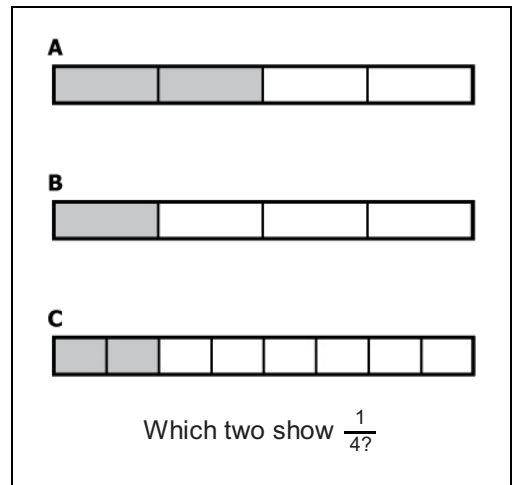
- A. 1
- B. 2
- C. 3

11.



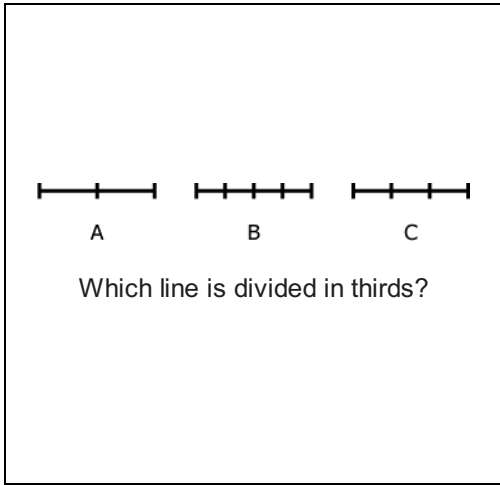
- A.  $\frac{2}{4}$
- B.  $\frac{3}{4}$
- C.  $\frac{1}{4}$

12.




- A. A & B
- B. B & C
- C. A & C

13.



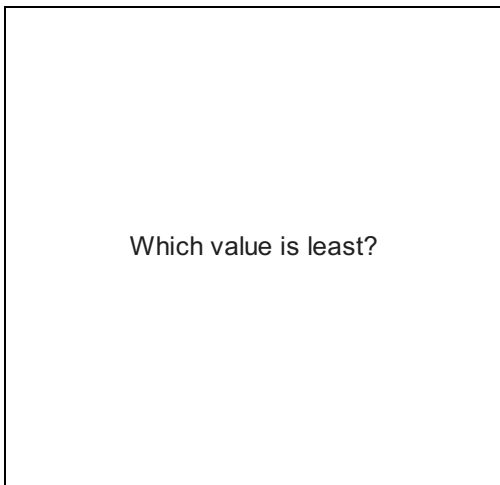
- A. A
- B. B
- C. C

14.



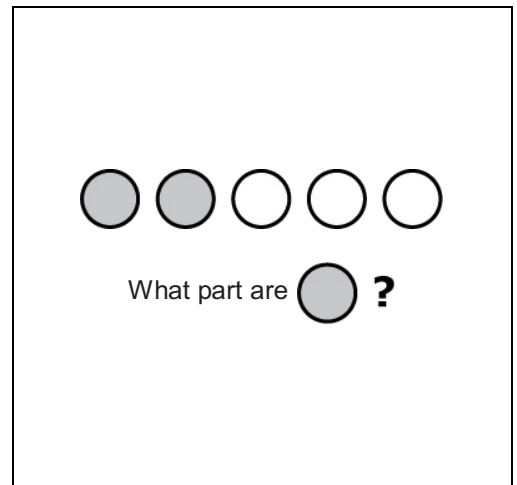
- A.  $\frac{5}{4}$
- B.  $\frac{4}{4}$
- C.  $\frac{3}{4}$

15.



- A.  $\frac{1}{3}$
- B.  $\frac{1}{5}$
- C.  $\frac{1}{4}$

16.



- A.  $\frac{2}{2}$
- B.  $\frac{2}{5}$
- C.  $\frac{2}{7}$