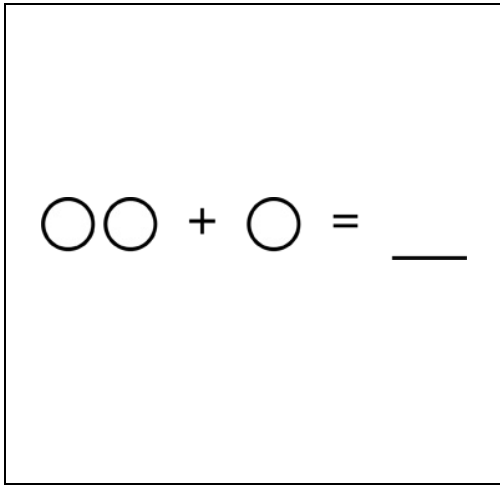


Math Numbers and Operations K_1

Student Name: _____


Date: _____

1.



- A. 9
- B. 5
- C. 3

2.



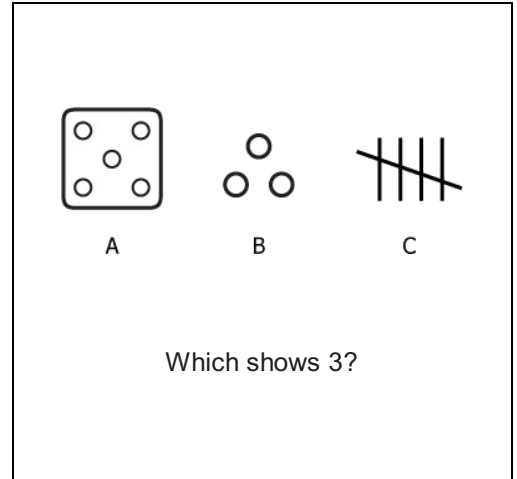
- A. 4
- B. 2
- C. 6

3.



- A. 10
- B. 7
- C. 6

4.



- A. A
- B. B
- C. C

5.

$$5 - 3 = \underline{\quad}$$

- A. 4
- B. 2
- C. 3

6.

$$5 + 5 = \underline{\quad}$$

- A. 8
- B. 10
- C. 11

7.

10		12
----	--	----

What number is missing?

- A. 11
- B. 9
- C. 13

8.

☆☆

How many?

- A. 1
- B. 2
- C. 3

9.

$$3 - 0 = \underline{\quad}$$

- A. 4
- B. 3
- C. 0

10.



Take 3 away.
How many are left?

- A. 6
- B. 2
- C. 3

11.

12		14
----	--	----

What number is missing?

- A. 15
- B. 11
- C. 13

12.



Take 1 away.
How many are left?

- A. 5
- B. 6
- C. 1

13.



Take 6 away.
How many are left?

- A. 6
- B. 1
- C. 0

14.

$$3 + 4 = \underline{\quad}$$

- A. 7
- B. 6
- C. 5

15.

16		14
----	--	----

What number is missing?

- A. 13
- B. 17
- C. 15

16.

1, 2, __, 4, 5
What number goes here?

- A. 0
- B. 6
- C. 3