

Math Numbers and Operations K_6

Student Name: _____

Date: _____

1.




7		9
---	--	---

What number is missing?

- A. 10
- B. 8
- C. 6

2.

Which shows 3?

- A. 
- B. 
- C. 

3.

Which shows 7?

- A. 
- B. 
- C. 

4.

6		8
---	--	---

What number is missing?

- A. 9
- B. 5
- C. 7

5.

$$3 - 2 = \underline{\quad}$$

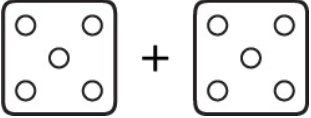
- A. 4
- B. 0
- C. 1

6.

$$\begin{array}{r} 1 \\ + 0 \\ \hline \square \end{array}$$

- A. 0
- B. 2
- C. 1


7.



How many?

- A. 11
- B. 10
- C. 9

8.



What number is missing?

- A. 3
- B. 7
- C. 5

9.

□○□○_○

What goes here?

- A. △
- B. □
- C. ○

10.

☆☆☆☆☆☆☆☆

How many?

- A. 16
- B. 10
- C. 8

11.

16		18
----	--	----

What number is missing?

- A. 19
- B. 17
- C. 15

12.

2₄6

Which has the greatest value?

- A. 6
- B. 4
- C. 2

13.

11, 12, __, 14, 15
What number goes here?




- A. 16
- B. 9
- C. 13

14.

5, 10, 15, __, 25
What number goes here?


- A. 30
- B. 20
- C. 5



15.




Which group has the least?

- A. 
- B. 
- C. 

16.


What goes here?

- A. 
- B. 
- C. 