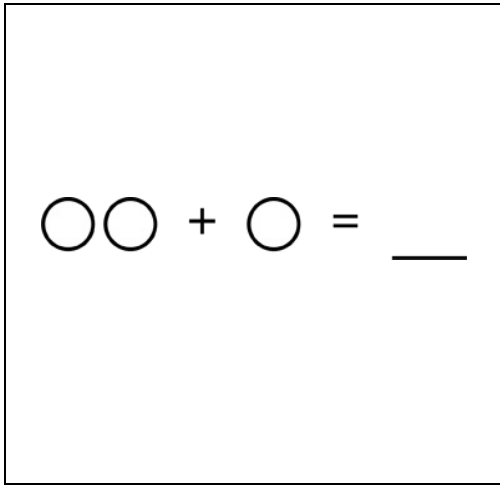


Math Numbers and Operations K_7

Student Name: _____


Date: _____

1.



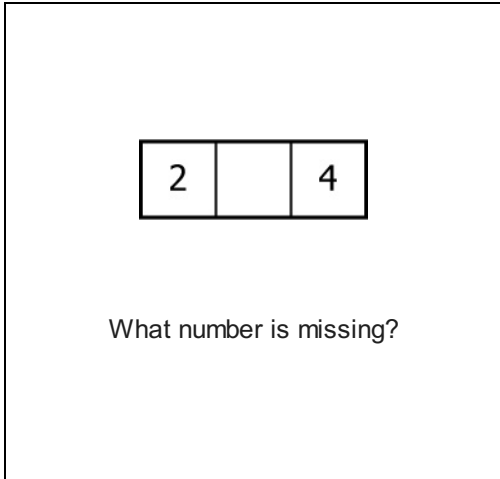
- A. 9
- B. 5
- C. 3

2.



- A. 4
- B. 2
- C. 6

3.



- A. 5
- B. 1
- C. 3

4.



- A. ○ ○
- B. □ □ □
- C. ☆ ☆ ☆ ☆ ☆

5.

$$5 - 3 = \underline{\quad}$$

- A. 4
- B. 2
- C. 3

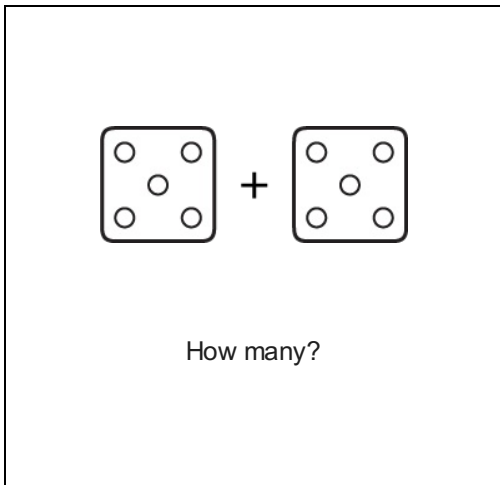
6.

10		8
----	--	---

What number is missing?

- A. 7
- B. 11
- C. 9

7.



- A. 11
- B. 10
- C. 9


8.




4		6
---	--	---

What number is missing?

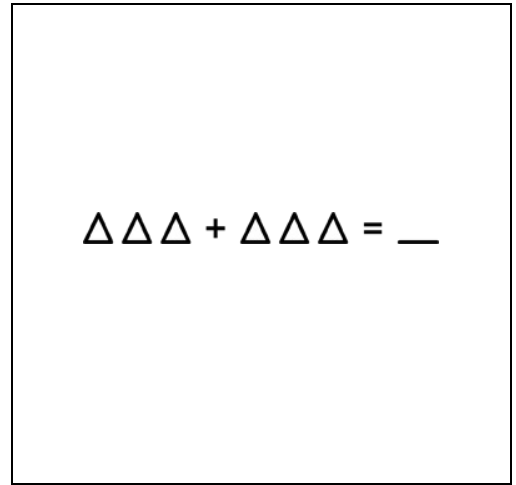
- A. 3
- B. 7
- C. 5

9.




- A. 
- B. 
- C. 




10.



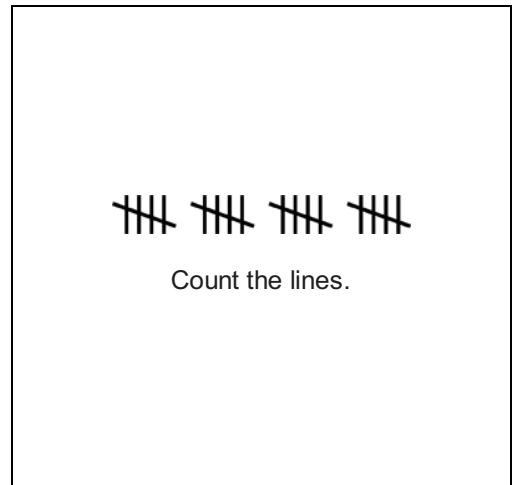
- A. 2
- B. 9
- C. 6

11.



- A. 
- B. 
- C. 

12.



- A. 10
- B. 20
- C. 4

13.

17		19
----	--	----

What number is missing?

- A. 18
- B. 16
- C. 20

14.

○○○○ + ○○○○ = _

- A. 10
- B. 9
- C. 8

15.

17		15
----	--	----

What number is missing?

- A. 18
- B. 16
- C. 14

16.

5, 10, __, 20, 25

What number goes here?

- A. 10
- B. 5
- C. 15