

Math Numbers and Operations K_8

Student Name: _____

Date: _____


1.

□ □ ○ □ □ ○ _ _ ○

What goes here?

- A. □ ○
- B. □ □
- C. ○ ○

2.



How many dogs?

- A. 5
- B. 2
- C. 4

3.

3		5
---	--	---

What number is missing?

- A. 4
- B. 6
- C. 2

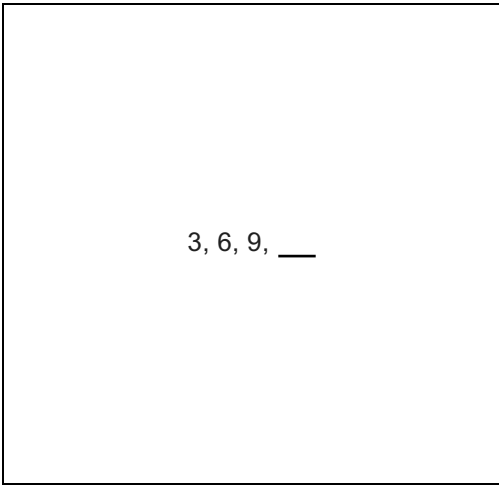
4.

6		8
---	--	---

What number is missing?

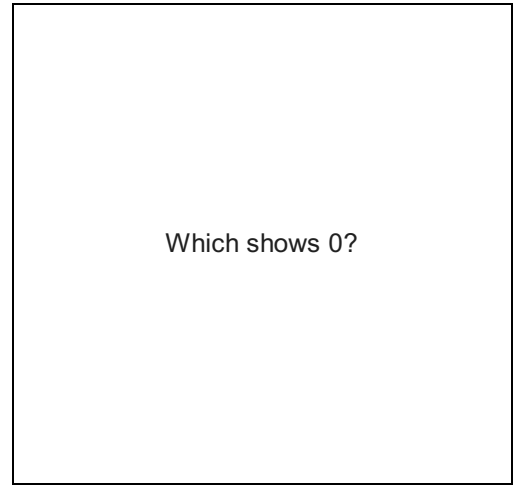
- A. 9
- B. 5
- C. 7

5.



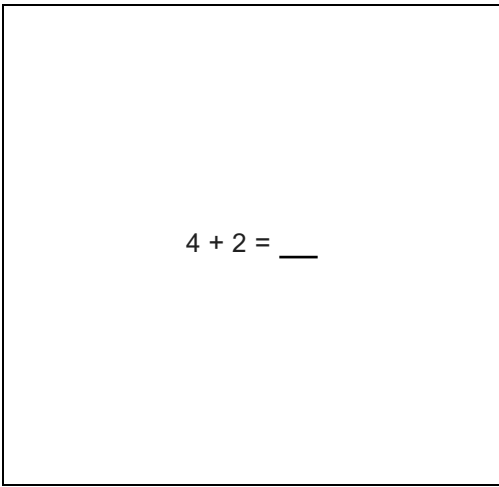
- A. 15
- B. 12
- C. 11

6.




- A. □□
- B. □□□□□
- C.

7.



- A. 4
- B. 8
- C. 6

8.



- A. △
- B. □
- C. ○

9.

$$3 - 0 = \underline{\quad}$$

- A. 4
- B. 3
- C. 0

10.

$$\bigcirc\bigcirc + \bigcirc\bigcirc = \underline{\quad}$$

- A. 3
- B. 5
- C. 4

11.



Take 3 away.

How many are left?

- A. 2
- B. 1
- C. 3

12.

$$12, 14, 16, \underline{\quad}$$

- A. 10
- B. 12
- C. 18

13.

$$\begin{array}{r} 4 \\ + 5 \\ \hline \square \end{array}$$

- A. 9
- B. 6
- C. 10

14.



What number is missing?

- A. 7
- B. 1
- C. 4


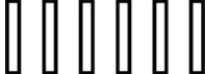
15.

5, 10, ___

- A. 16
- B. 11
- C. 15

16.

Which shows 9?

- A. 
- B. 
- C. 