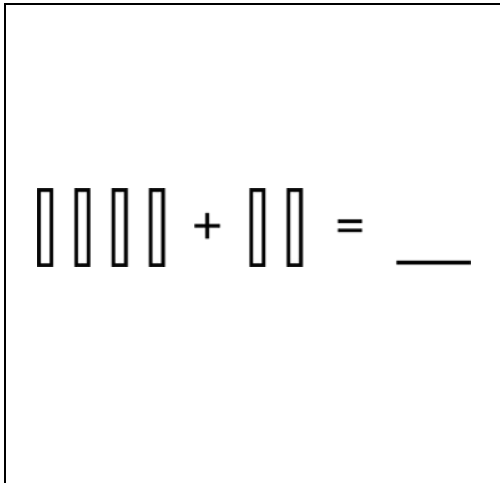


Math Numbers and Operations K_9

Student Name: _____


Date: _____

1.



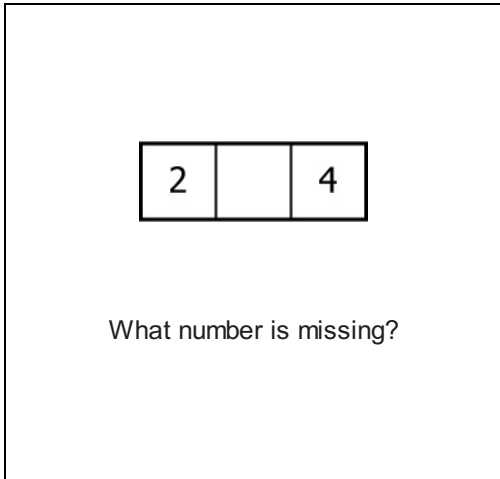
- A. 4
- B. 8
- C. 6

2.



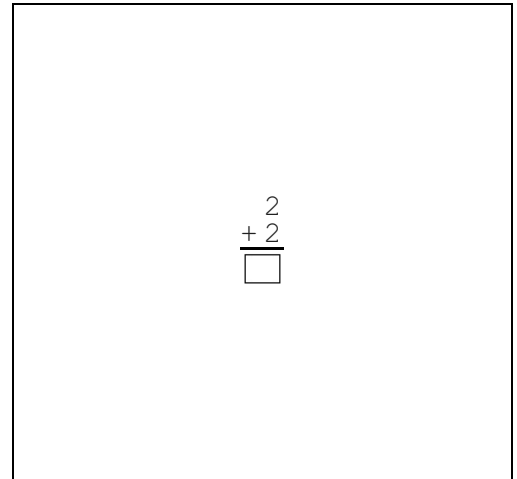
- A. $\square \square \square \square \square \square$
- B. $\square \square$
- C. $\square \square \square \square \square$

3.



- A. 5
- B. 1
- C. 3

4.



- A. 0
- B. 4
- C. 3

5.

$$4 + 6 = \underline{\quad}$$

- A. 15
- B. 10
- C. 9

6.



What number is missing?

- A. 17
- B. 13
- C. 15

7.



What number is missing?

- A. 11
- B. 9
- C. 13

8.



What goes here?

- A. △
- B. □
- C. ○

9.

1		3
---	--	---

What number is missing?

- A. 0
- B. 4
- C. 2

10.

10, 11, __

What number goes here?

- A. 12
- B. 5
- C. 13

11.

☆☆☆ ☆☆

How many?

- A. 5
- B. 6
- C. 4

12.

0, 10, 20, 30, __

- A. 31
- B. 40
- C. 50

13.

$$\begin{array}{r} 4 \\ + 4 \\ \hline \square \end{array}$$

- A. 8
- B. 6
- C. 9

14.

1, 2, 3, 4, 5
What number is second?

- A. 2
- B. 3
- C. 5

15.

$$\begin{array}{ccc} \square & \square & \\ & & \square \end{array} + \begin{array}{ccc} \square & \square & \square \\ & \square & \square \end{array} = \underline{\quad}$$

- A. 10
- B. 6
- C. 8

16.

$\square \circ \square \circ _$
What goes here?

- A. \triangle
- B. \square
- C. \circ